

Organic Chemistry

with a Biological Emphasis

By

Tim Soderberg

University of Minnesota, Morris

UC San Diego Edition

Edited with permission from the author by
Valerie A. Schmidt & Haim Weizman

AY23-24



This work is licensed under the Creative Commons Attribution-NonCommercial-ShareAlike 4.0 International License. <https://creativecommons.org/licenses/by-nc-sa/4.0/>

Chapter 8

Nucleophilic substitution reactions



(Credit: <https://www.flickr.com/photos/12567713@N00/>)

Introduction

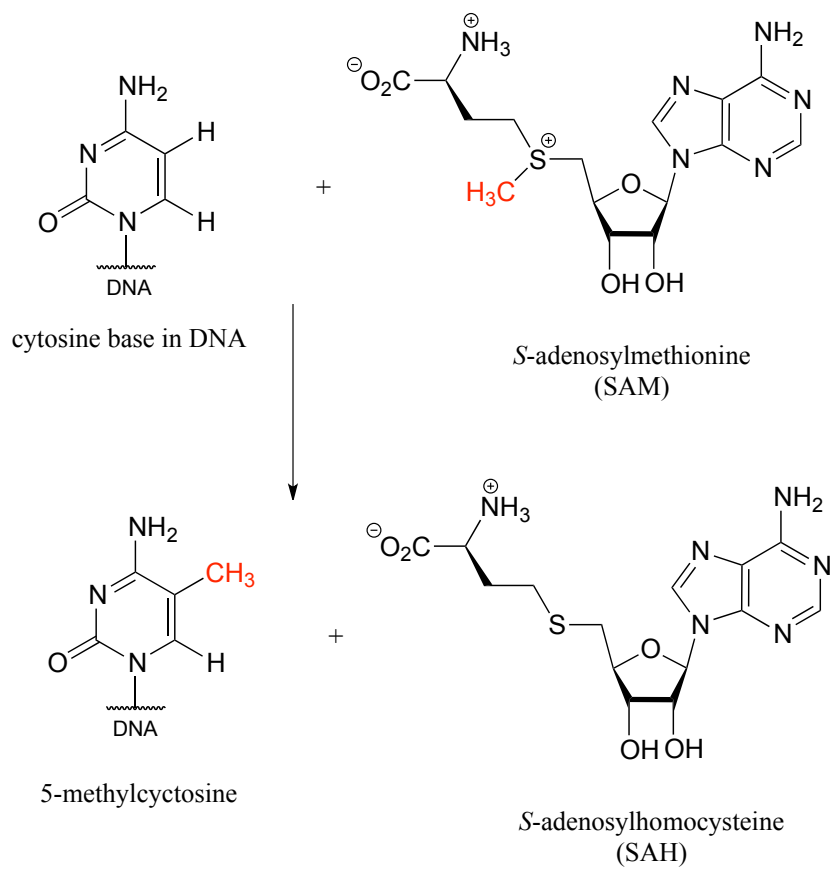
Dr. Tim Spector, Professor of Genetic Epidemiology at Kings College in London, knows a thing or two about twins. He should: as head of the Department of Twin Research at Kings College, Spector works with about 3500 pairs of identical twins, researching the influence of a person's genetic blueprint on everything from how likely they are to be obese, to whether they hold religious beliefs, to what kind of person they fall in love with. Anyone who is a twin, or has ever known a pair of identical twins, can attest to how remarkably similar they are to each other, even in the rare cases of adopted twins raised in separate homes. Dr. Spector, however, has over the course of his research become much more interested in how they are different.

An article about Spector in the British newspaper *The Guardian* (June 1, 2013) begins with an introduction to two middle-aged twin sisters named Barbara and Christine, one of the pairs of twins in the Kings College study group. Although they were treated almost as a single person when growing up, with identical haircuts and clothes, the twins began to diverge in their teenage years as they gained the freedom to make their own choices. They began to dress quite differently, with Christine choosing much more conservative styles than Barbara. Christine describes herself as being self-conscious, while Barbara has always been more confident. Christine suffers from depression, but Barbara does not.


Given that they were born with the exact same DNA and were raised in the same home, where do these differences come from? In public debates about why people are the way they are, a catch phrase that often comes up is 'nature vs. nurture': people argue, in other words, about the relative influence of a person's genes vs. the influence of their environment. In Barbara and Christine's case, one would assume that the 'nature' is identical and given that they grew up in the same house, the 'nurture' side of the equation should also be quite similar.

As it turns out, the 'nature' component may not be so identical after all. Based on his work with twins, Spector now thinks that subtle changes to Barbara's and Christine's DNA *after* conception - and indeed, throughout their lifetimes - may be a much more important determinant of their physical and psychological characteristics than was previously believed. As we age from infants to adulthood, some of our DNA bases are modified by methylation: in other words, a methyl (CH_3) group replaces a hydrogen atom. In humans and other mammals, this mainly happens to cytosine (C) bases, while in bacteria it is mainly adenosine (A) bases which are methylated. The biomolecule that serves as the methyl group donor in both cases is called S-adenosyl methionine, or 'SAM' for short.

Methylation of cytosine:



Methylation of adenine:



In mammals, gene methylation seems to occur in different patterns in different people - even in identical twins - in response to environmental factors. Methylation also seems to have the effect of amplifying or muting a gene's function, by altering how it interacts with regulatory proteins. The combined effect of many gene methylation events can be profound, as groups of interrelated genes are 'turned up' or 'turned down' in concert. Professor Spector thinks that the many differences

between Barbara and Christine probably stem, at least in part, from differences in how their genes have been methylated over the course of their lives so far.

In this chapter, we delve for the first time into 'real' organic reactions, beyond the simple proton transfer events of Bronsted acid-base reactions that we looked at in chapter 7. The methylation of DNA is an excellent example of a type of organic reaction called *nucleophilic substitution*, to which we were introduced briefly in chapter 6 as a model for learning about some of the fundamental concepts of organic reactivity. Now we will delve more deeply into three crucial players in this bond-forming and bond-breaking process: the nucleophile, the electrophile, and the leaving group. In doing so, we will get a chance to practice and refine our skills in drawing organic reaction mechanisms using the curved arrow formality, and we will think about what a transition state and a reactive intermediate of a reaction might look like, and how the structure of these species determines the regiochemical and stereochemical outcome of a nucleophilic substitution reaction. Perhaps, in the time spent working on this chapter, some of the cytosines in your DNA will undergo nucleophilic substitution reactions to become methylated - and who knows how this will influence who you go on to become?

Additional Reading:

Spector, Tim, 2013. [*Identically Different: Why We Can Change Our Genes.*](#) Overlook Hardcover. ISBN 978-1468306606

Learning Outcomes

- Use bond dipole theory to identify partially positive carbons that can act as electrophiles in a S_N2 reaction
- Given a molecular structure identify nucleophilic/electrophilic and Lewis acidic/basic atoms (sites)
- Identify the nucleophile, electrophile, and leaving group in an S_N1 or S_N2 reaction.
- Use curved arrows to show the movement of electrons as the nucleophile attacks an electrophilic carbon in an S_N2 reaction (i.e., write a mechanism)
- Use curved arrows to show the movement of electrons as the leaving group leaves and a nucleophile attacks the carbocation intermediate in an S_N1 reaction (i.e., write a mechanism)
- Draw a complete mechanism for an S_N2 reaction. Illustrate the transition state for an S_N2 reaction including the stereochemical outcomes
- identify and draw the orbitals that participate in S_N2 reactions
- Demonstrate that S_N2 reactions result in inversion of configuration at the electrophilic carbon.
- Draw a complete mechanism for an S_N1 reaction, in particular a hydrolysis or other solvolysis S_N1 reaction.
- Draw an energy diagram illustrating the energy profile of a typical S_N1 solvolysis reaction. Illustrate all transition states that are part of an S_N1 reaction.
- Use the factors that influence nucleophilicity to evaluate the relative nucleophilicity of two or more compounds and predict relative rates of S_N2 reactions with different nucleophiles and a common electrophile.
- Rank given electrophiles rates in S_N2 given reaction conditions
- Rank given nucleophiles rates in S_N2 given reaction conditions
- Use periodic trends to explain trends in nucleophilicity and electrophilicity
- Using knowledge of pK_a values and trends, rank the relative leaving group abilities of leaving groups.

Section 8.1: Two mechanistic models for nucleophilic substitution

As we begin our study of nucleophilic substitution reactions, we will focus first on simple alkyl halide compounds. While the specific reactions we'll initially consider do not occur in living things, it is nonetheless useful to start with alkyl halides as a model to illustrate some fundamental ideas that we must cover. Later, we will move on to apply what we have learned about alkyl halides to the larger and more complex biomolecules that are undergoing nucleophilic substitution right now in your own cells.

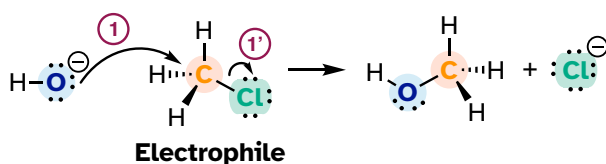
8.1A: The S_N2 mechanism

You may recall from our brief introduction to the topic in chapter 6 that there are two mechanistic models for how a nucleophilic substitution reaction can proceed. In one mechanism, the reaction is **concerted**: it takes place in a single step, and bond-forming and bond-breaking occur simultaneously. This is illustrated by the reaction between chloromethane and hydroxide ion:

8.1.1

An S_N2 Mechanism

Nucleophile



Describe the reaction

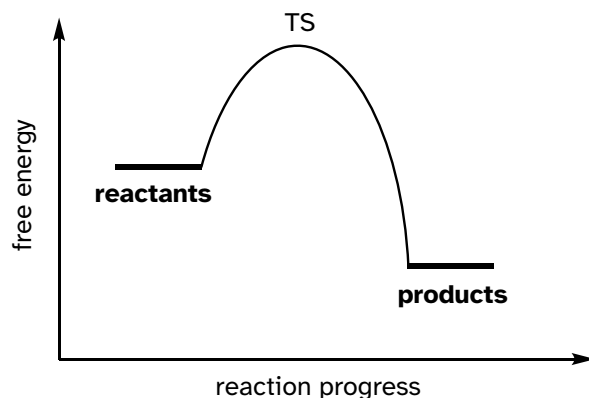
Nucleophile: hydroxide (OH^-)
 Electrophile: alkyl halide
 (C-atom attached to Cl)
 Leaving group: chloride (Cl^-)

bond-breaking and bond-forming occur simultaneously

Recall that the hydroxide ion in this reaction is acting as a **nucleophile** (an electron-rich, nucleus-loving species), the carbon atom of chloromethane is acting as an **electrophile** (an electron-poor species which is attracted to electrons), and the chloride ion is the **leaving group** (where the name is self-evident).

Organic chemists refer to this mechanism by the term '**S_N2**', where S stands for 'substitution', the subscript N stands for 'nucleophilic', and the number 2 refers to the fact that this is a **bimolecular reaction**: the overall rate depends on a step in which two separate species collide. A potential energy diagram for this reaction shows the transition state (TS) as the highest point on the pathway from reactants to products.

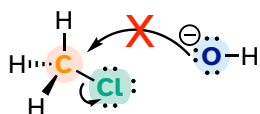
8.1.2

A Reaction Coordinate Diagram for an S_N2 Mechanism

The geometry of an S_N2 reaction is specific: the reaction can only occur when the nucleophile collides with the electrophilic carbon from the *opposite* side relative to the leaving group. This is referred to as a **backside attack**. The nucleophile donates two electrons to the empty antibonding orbital at the most accessible site which is directly opposite to the bond between the carbon and the leaving group. The electron-rich leaving group blocks access from the front side.

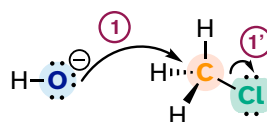
8.1.3

“front side attack” ❌



access of the nucleophile to empty orbital is blocked by the electron-rich leaving group

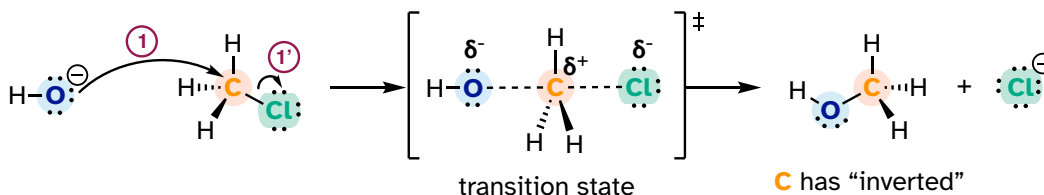
“back side attack” ✅



attack of the nucleophile occurs at the most accessible site to an empty orbital

The result of backside attack is that the bonding geometry at the electrophilic carbon *inverts* (turns inside-out) as the reaction proceeds.

8.1.4



The transition state of the reaction is illustrated by drawing dotted lines to represent the covalent bonds that are in the process of breaking or forming. Because the formal charge on the oxygen nucleophile changes from negative one to zero as

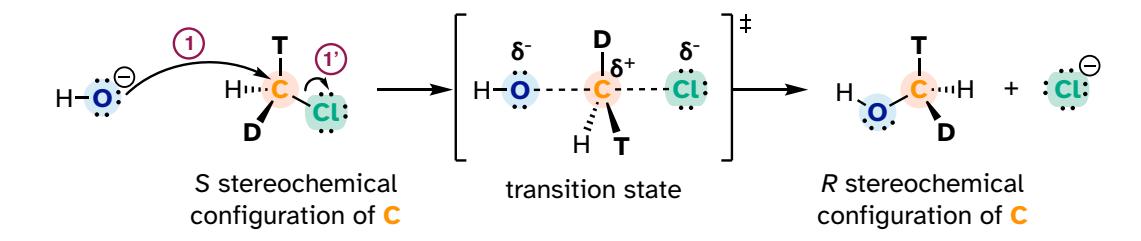
the reaction proceeds, and conversely the charge on the chlorine leaving group changes from zero to negative one, at the transition state both atoms are shown bearing a *partial* negative charge (the symbol δ^-). One other drawing convention for transition states is to use brackets, with the double-dagger symbol in subscript.

Notice that the transition state for an S_N2 reaction has **trigonal bipyramidal geometry**: the nucleophile, electrophile, and leaving group form a straight line, and the three substituents on carbon (all hydrogen atoms in this case) are arranged in the same plane at 120° angles.

Exercise 8.1: What is the measure in degrees) of the H-C-O angle in the S_N2 transition state illustrated above?

Consider what would happen if we were to replace one of the hydrogen atoms in chloromethane with deuterium (the ^2H isotope), and one with tritium (the radioactive ^3H isotope). Now, because it has four different substituents, our carbon electrophile is a chiral center. We'll arbitrarily assume that we start with the *S* enantiomer.

8.1.5



As the hydroxide nucleophile attacks from the backside and the bonding geometry at carbon inverts, we see that the stereochemistry of the product reflects this inversion: we end up with the *R* enantiomer of the chiral product.

S_N2 reactions proceed with inversion of stereochemical configuration at the electrophilic carbon.

Note that although inversion **always occurs**, in some cases the assigned absolute configuration may stay the same (for example, *R* starting material will result in *R* product). This is because *R/S* designation is based on priority rules. In the above example, the nucleophile and the leaving group have the highest priority but that not always the case.

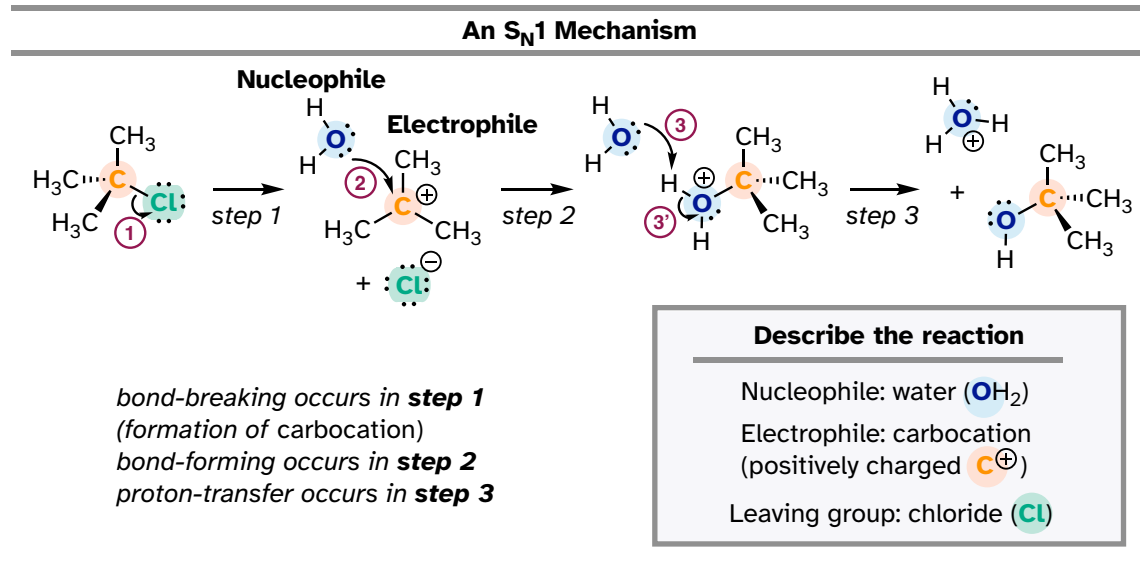
[video tutorial/animation: inversion of configuration during SN2 reactions](#)

8.1B: The S_N1 mechanism

A second model for the nucleophilic substitution reaction is called the **S_N1 mechanism**. The '1' in S_N1 indicates that the rate-determining step of the reaction is *unimolecular*: in other words, the rate-determining step involves a single molecule breaking apart (rather than two molecules colliding as was the case in the S_N2 mechanism.)

In an S_N1 mechanism the carbon-leaving group bond breaks *first*, before the nucleophile approaches, resulting in the formation of a carbocation intermediate (step 1):

8.1.6



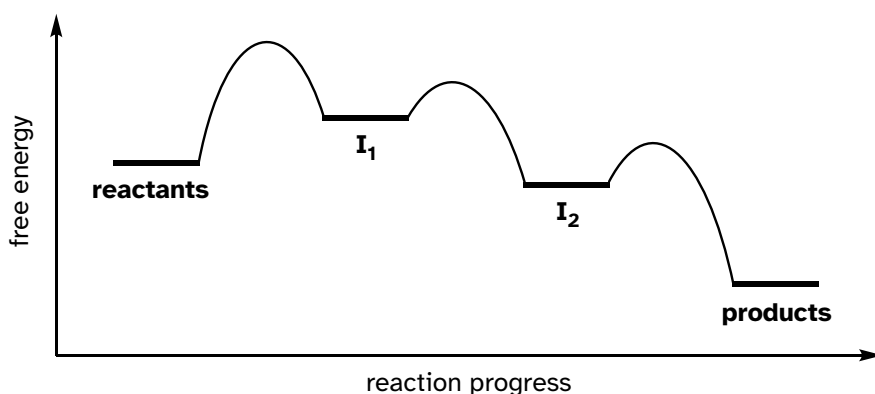
A carbocation is a powerful electrophile: because the carbon lacks a complete octet of valence electrons, it is 'electron-hungry'. In step 2, a lone pair of electrons on the water nucleophile fills the empty *p* orbital of the carbocation to form a new bond.

Notice that this is a three-step mechanism, with a final, rapid acid-base step leading to the alcohol product.

A potential energy diagram for this S_N1 reaction shows that each of the two positively charged intermediate stages (I₁ and I₂ in the diagram) can be visualized as a valley in the path of the reaction, higher in energy than both the reactant and product but lower in energy than the transition states.

8.1.7

A Reaction Coordinate Diagram for an S_N1 Mechanism



The first, bond-breaking step is the slowest, rate-determining step - notice it has the highest activation energy and leads to the highest-energy species (I_1 , the carbocation intermediate). Step 2 is rapid: a new covalent bond forms between a carbocation and a water nucleophile, and no covalent bonds are broken. Recall from chapter 7 that Bronsted-Lowry proton transfer steps like step 3 are rapid, with low activation energies.

Hydrolysis

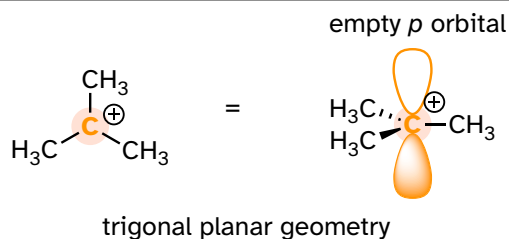
The nucleophilic substitution reactions we have seen so far are examples of **hydrolysis**. This term is one that you will encounter frequently in organic and biological chemistry. Hydrolysis means '*breaking with water*': in a hydrolysis reaction, a water molecule (or hydroxide ion) participates in the breaking of a covalent bond. There are many reaction types other than nucleophilic substitution that can accurately be described as hydrolysis, and we will see several examples throughout the remaining chapters of this book.

Solvolysis is a more general term, used when a bond in a reagent is broken by a solvent molecule: usually, the solvent in question is water or an alcohol such as methanol or ethanol.

Exercise 8.2: Draw a mechanism for the S_N1 solvolysis of *tert*-butyl chloride in methanol. What new functional group has been formed?

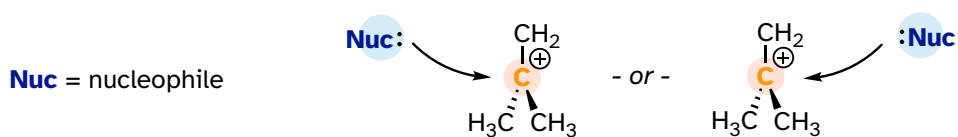
We saw that S_N2 reactions result in inversion of stereochemical configuration at the carbon center. What about the stereochemical outcome of S_N1 reactions? Recall that a carbocation is sp^2 -hybridized, with an empty p orbital perpendicular to the plane formed by the three sigma bonds:

8.1.8



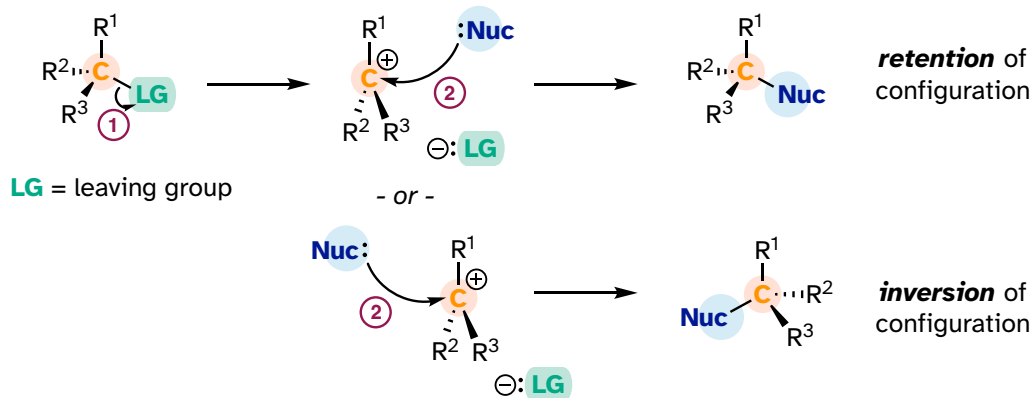
In the second step of an S_N1 reaction, a nucleophile can attack from *either side* of the carbocation (the leaving group is already gone, and thus cannot block an attack from one side like in an S_N2 reaction).

8.1.9



Consider an S_N1 reaction with a chiral, tertiary alkyl chloride:

8.1.10

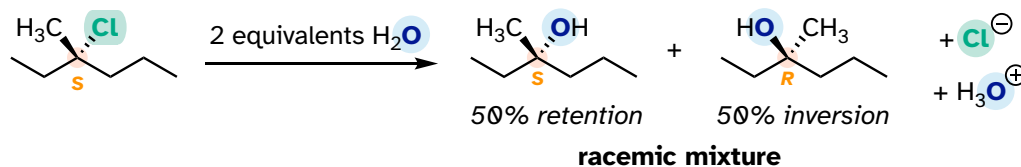


Because the nucleophile is free to attack from either side of the carbocation electrophile, the reaction leads to a 50:50 mixture of two stereoisomeric products. In other words:

In general, *nonenzymatic* S_N1 reaction can occur with either **retention** or **inversion** of configuration at the electrophilic carbon, leading to **racemization** if the carbon is chiral.

For an example, consider the hydrolysis of (*S*)-3-chloro-3-methylhexane.

8.1.11



The result of this (nonenzymatic) reaction is a racemic mixture of chiral alcohols.

It is important to remember, however, that *enzymatic* reactions are in almost all cases very specific regarding the stereochemical outcome. A biochemical S_N1 reaction, as we shall see later, can result in either inversion or retention of configuration at the electrophilic carbon, but generally *not* a mixture of both: the two reactants are bound with specific geometry in the enzyme's active site, so that the nucleophile can approach from one side only.

(The following exercises refer to nonbiological reactions)

Exercise 8.3:

- Draw a complete mechanism for the hydrolysis reaction in the previous figure, showing all bond-breaking and bond-forming steps, and all intermediate species.
- Draw structures representing TS_1 and TS_2 in the reaction. Use the solid/dash wedge convention to show three dimensions.
- What is the expected optical rotation of the product mixture?
- Could the two organic products be separated on a silica column chromatography?

Exercise 8.4:

- Draw the product(s) of the hydrolysis of (*R*)-3-chloro-3-methyl heptane.
- What can you predict, if anything, about the optical rotation of the product(s)?
- Draw the product(s) of the hydrolysis of (3*R*,5*R*)-3-chloro-3,5-dimethyl heptane.
- What can you predict, if anything, about the optical rotation of the product(s)?

Before we go on to look at some actual biochemical nucleophilic substitution reactions, we first need to lay the intellectual groundwork by focusing more closely on the characteristics of the three principal partners in the nucleophilic substitution reaction: the nucleophile, the electrophile, and the leaving group. In addition, we need to consider the carbocation intermediate that plays such a key role in the S_N1 mechanism. For the sake of simplicity, we will continue to use simple, non-biological organic molecules and reaction examples as we work through the basic concepts.

[Video tutorial/animation: SN1 reactions](#)

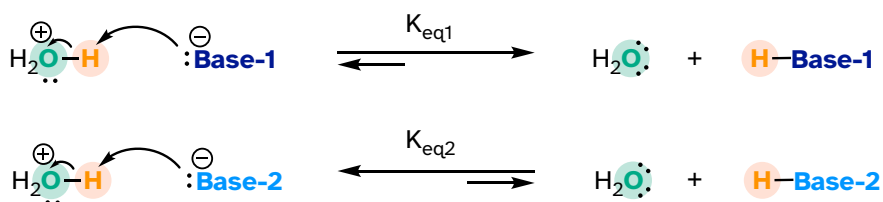
Section 8.2: Nucleophiles

8.2A: What is a nucleophile?

A nucleophile is an atom or functional group with a pair of electrons (usually a non-bonding, or lone pair) that can be shared. The same, however, can be said about a base: in fact, bases can act as nucleophiles, and nucleophiles can act as bases. What, then, is the difference between a base and a nucleophile?

A Bronsted-Lowry base, as you will recall from chapter 7, uses a lone pair of electrons to form a new bond with an acidic proton. We spent much of chapter 7 discussing how to evaluate how basic a species is. Remember that when we evaluate basicity - the strength of a base - we speak in terms of *thermodynamics*: where does equilibrium lie in a reference acid-base reaction?

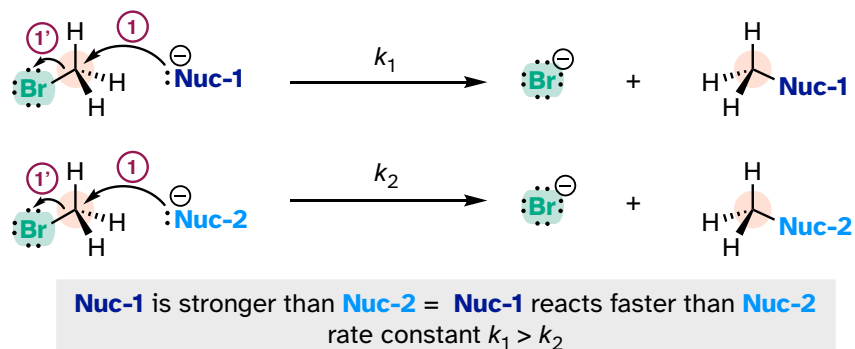
8.2.1



Base-1 is stronger than **Base-2** = $K_{\text{eq1}} > K_{\text{eq2}}$

We will spend much of this section discussing how to evaluate how nucleophilic a species is - in other words, its **nucleophilicity**. A nucleophile shares its lone pair of electrons with an electrophile - an electron-poor atom other than a hydrogen, usually a carbon. When we evaluate nucleophilicity, we are thinking in terms of *kinetics* - how fast does the nucleophile react with a reference electrophile?

8.2.2

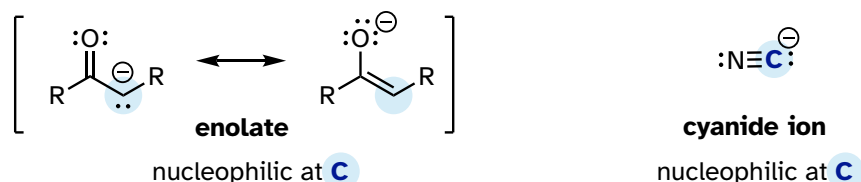


In both laboratory and biological organic chemistry, the most common nucleophilic atoms are oxygen, nitrogen, and sulfur, and the most common nucleophilic compounds and functional groups are water/hydroxide ion, alcohols, phenols, amines, thiols, and sometimes carboxylates.

In laboratory (non-biological) reactions, halide (I^- , Br^- , Cl^- , F^-) and azide (N_3^-) anions are also commonly seen acting as nucleophiles in addition to the groups mentioned above.

Carbon atoms can also be nucleophiles - enolate ions (section 7.6) are common carbon nucleophiles in biochemical reactions, while the cyanide ion (CN^-) is just one example of a carbon nucleophile commonly used in the laboratory.

8.2.3



Understanding carbon nucleophiles will be critical when we study, in chapters 12 and 13, the enzyme-catalyzed reactions in which new carbon-carbon bonds are formed in the synthesis of biomolecules such as DNA and fatty acids. In the present chapter, however, we will focus on heteroatom (non-carbon) nucleophiles.

Now, let's consider several factors that influence how nucleophilic an atom or functional group is. We'll start with protonation state.

8.2B: Protonation state

The protonation state of a group has a very large effect on its nucleophilicity. A negatively charged hydroxide ion is much more nucleophilic (and basic) than a water molecule. In practical terms, this means that a hydroxide nucleophile will

react in an S_N2 reaction with chloromethane several orders of magnitude faster than a water nucleophile will.

Likewise, a thiolate anion is more nucleophilic than a neutral thiol, and a neutral amine is nucleophilic, whereas an ammonium cation is not.

In a non-biological context, S_N2 reactions tend to occur with more powerful, anionic nucleophiles, where the nucleophile can be thought of as actively displacing ('pushing') the leaving group off the carbon. S_N1 reactions, in contrast, tend to be solvolysis reactions, with a weak, neutral nucleophile such as water or an alcohol.

8.2C: Periodic trends in nucleophilicity

Just as with basicity, there are predictable periodic trends associated with nucleophilicity. Moving horizontally across the second row of the periodic table, the trend in nucleophilicity parallels the trend in basicity:

The horizontal periodic trend in nucleophilicity

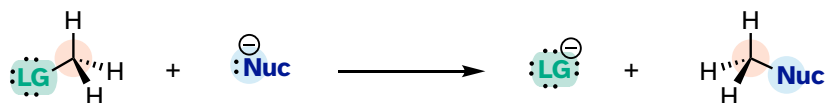
more nucleophilic $\text{NH}_2^- > \text{OH}^- > \text{F}^-$ *less nucleophilic*

more nucleophilic $\text{R-NH}_2 > \text{R-OH}$ *less nucleophilic*

Recall from section 7.3A that the basicity of atoms decreases as we move vertically down a column on the periodic table: thiolate ions are less basic than alkoxide ions, for example, and bromide ion is less basic than chloride ion, which in turn is less basic than fluoride ion. Recall also that this trend can be explained by considering the increasing size of the 'electron cloud' around the larger ions: the electron density inherent in the negative charge is spread around a larger volume, which tends to increase stability (and thus reduce basicity).

The vertical periodic trend for nucleophilicity is somewhat more complicated than that for basicity and depends on the solvent in which the reaction is taking place. Take the general example of the S_N2 reaction below:

8.2.4

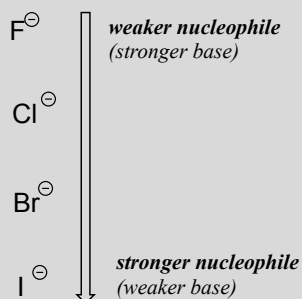


... where Nuc^- is one of the halide ions: fluoride, chloride, bromide, or iodide, and X is a common leaving group. If this reaction is occurring in a **protic solvent** (that is, a solvent that has a hydrogen atom bonded to an oxygen or nitrogen - water, methanol and ethanol are protic solvents), then *the reaction will go fastest when*

iodide is the nucleophile, and slowest when fluoride is the nucleophile, reflecting the relative strength of the nucleophile.

The vertical periodic trend in nucleophilicity in water and other protic solvents

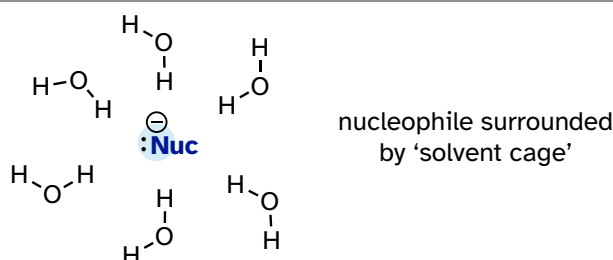
(Opposite of the trend in basicity!)



This is the *opposite* of the vertical periodic trend in basicity (section 7.3A), where iodide is the *least* basic. What is going on here? Shouldn't the stronger base, with its more reactive unbonded valence electrons, also be the stronger nucleophile?

As mentioned above, it all has to do with the solvent. Remember, we are talking now about the reaction running in a *protic* solvent like water. Protic solvent molecules form strong noncovalent interactions with the electron-rich nucleophile, essentially creating a 'solvent cage' of hydrogen bonds:

8.2.5



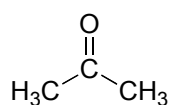
For the nucleophile to attack in an S_N2 reaction, the nucleophile-solvent hydrogen bonds must be disrupted - in other words, the nucleophilic electrons must 'escape through the bars' of the solvent cage. A weak base like iodide ion interacts weakly with the protons of the solvent, so these interactions are more readily disrupted. Furthermore, because the valence electrons on iodide ions are far from the nucleus, the electron cloud is **polarizable** - electron density can readily be pulled away from the nucleus, through the solvent cage and toward the electrophile.

A smaller, more basic anion such as fluoride is more highly shielded by stronger interactions with the solvent molecules. The electron cloud of the fluoride ion is

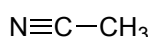
smaller and much less polarizable than that of an iodide ion: in water solvent, the larger iodide ion is a more powerful nucleophile than the smaller fluoride ion.

The above discussion of the vertical periodic trend in nucleophilicity applies to biochemical reactions because the biological solvent is water. The picture changes for laboratory reactions if we switch to a **polar aprotic solvent**, such as acetone, which is polar enough to solvate the polar and ionic compounds in the reaction but *is not a hydrogen bond donor* and does not form a strong 'solvent cage' like water does. In acetone and other polar aprotic solvents, the trend in nucleophilicity is the same as the trend in basicity: fluoride is the strongest base *and* the strongest nucleophile.

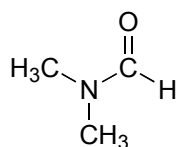
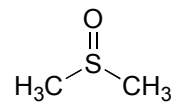
Structures of some of the most common polar aprotic solvents are shown below. These solvents are commonly used in laboratory nucleophilic substitution reactions.



acetone

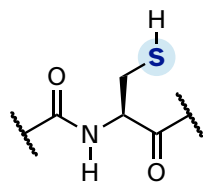


acetonitrile

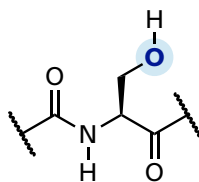
dimethylformamide
(DMF)dimethylsulfoxide
(DMSO)

In biological chemistry, the most important implication of the vertical periodic trend in nucleophilicity is that *thiols are more nucleophilic than alcohols*. The thiol group in a cysteine amino acid residue, for example, is more nucleophilic than the alcohol group on a serine, and cysteine often acts as a nucleophile in enzymatic reactions. The thiol group on coenzyme A is another example of a nucleophile we will see often in enzymatic reactions later. Of course, reactions with oxygen and nitrogen nucleophiles are widespread in biochemistry as well.

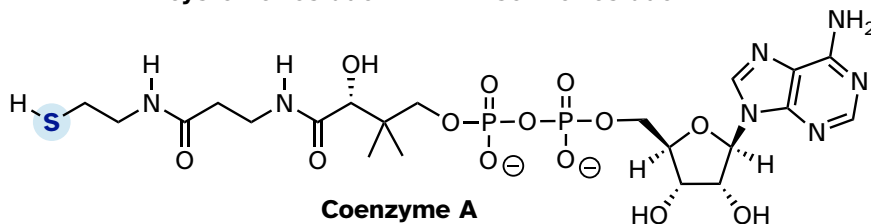
8.2.6



cysteine residue



serine residue

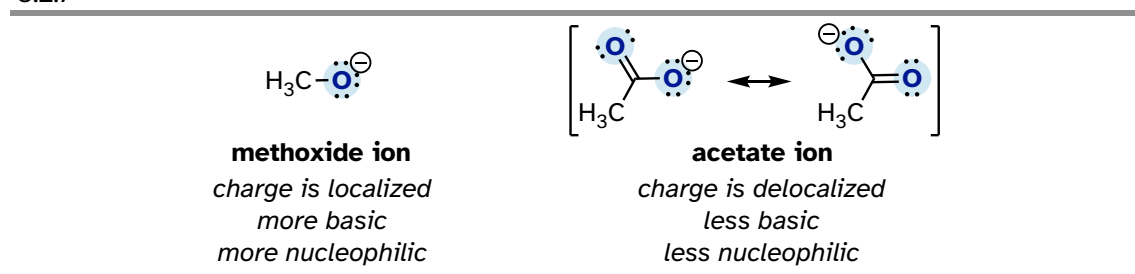


Coenzyme A

8.2D: Resonance effects on nucleophilicity

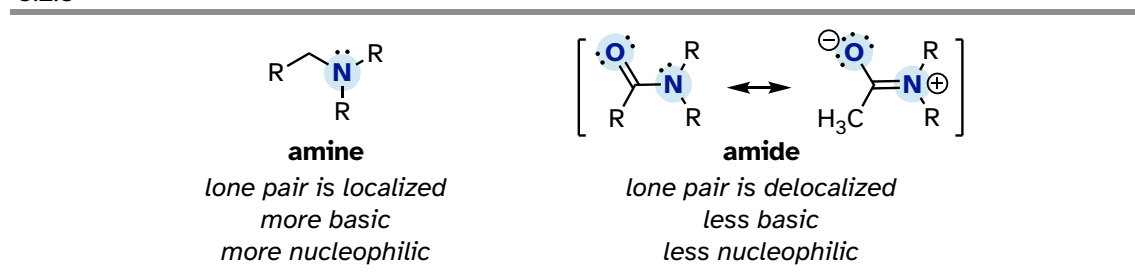
Resonance effects also come into play when comparing the inherent nucleophilicity of different molecules. The reasoning involved is the same as that which we used to understand resonance effects on basicity (see section 7.3B). If the electron lone pair on a heteroatom is delocalized by resonance, it is inherently less reactive - meaning less nucleophilic, and less basic. An alkoxide ion, for example, is more nucleophilic and more basic than a carboxylate group, even though in both cases the nucleophilic atom is negatively charged oxygen. In an alkoxide, the negative charge is localized on a single oxygen, while in the carboxylate the charge is delocalized over two oxygen atoms by resonance.

8.2.7



The nitrogen atom on an amide is less nucleophilic than the nitrogen of an amine, due to the resonance stabilization of the nitrogen lone pair provided by the amide carbonyl group.

8.2.8



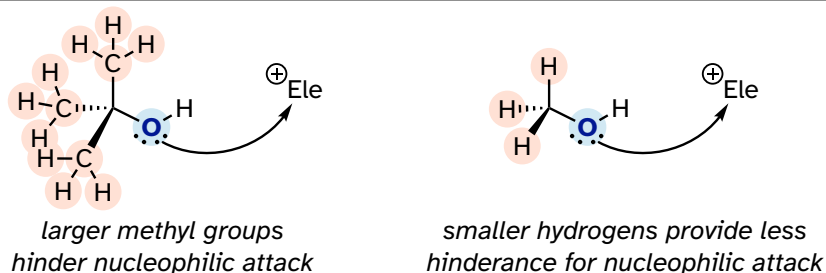
Exercise 8.5: Which amino acid has the more nucleophilic side chain - serine or tyrosine? Explain.

8.2E: Steric effects on nucleophilicity

Steric hindrance is an important consideration when evaluating nucleophilicity. For example, *tert*-butanol is less potent as a nucleophile than methanol. The comparatively bulky methyl groups on the tertiary alcohol effectively block the route of attack by the nucleophilic oxygen, slowing the reaction down considerably

(imagine trying to walk through a narrow doorway while carrying three large suitcases!).

8.2.9



A final note: When it comes to comparing the rate of nucleophilic substitution reactions, the strength of the nucleophile only matters for S_N2 reactions. It is irrelevant for S_N1 reactions, because the rate-determining step (when the leaving group departs and a carbocation intermediate forms) does *not* involve the nucleophile.

[Video tutorial: nucleophiles](#)

Exercise 8.6: Which is the better nucleophile - a cysteine side chain or a methionine side chain? A serine or a threonine? Explain.

Exercise 8.7: In each of the following pairs of molecules/ions, which is expected to react more rapidly with CH_3Cl in acetone solvent? Explain your choice.

- phenolate (deprotonated phenol) or benzoate (deprotonated benzoic acid)?
- water or hydronium ion?
- trimethylamine or triethylamine?
- chloride anion or iodide anion?
- CH_3NH^- or $\text{CH}_3\text{CH}_2\text{NH}_2$?
- acetate or trichloroacetate?
- aniline or 4-methoxyaniline?
- phenolate or 2,6-dimethylphenolate?

Section 8.3: Electrophiles and carbocation stability

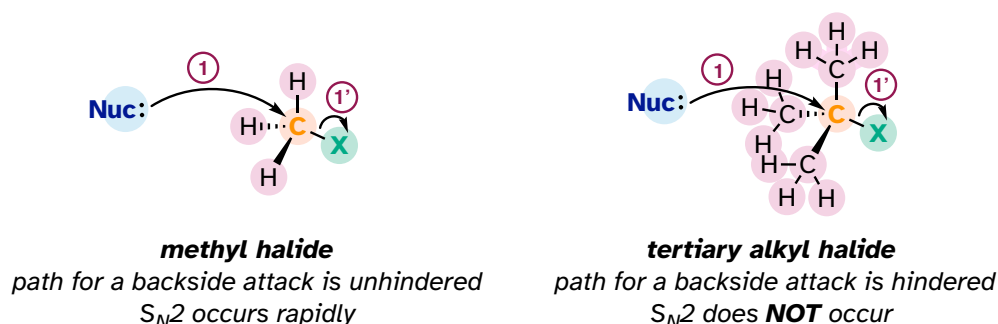
Next, we turn to electrophiles. In most of the nucleophilic substitution reactions you will see in this and other organic chemistry texts, the electrophilic atom is a carbon bonded to an electronegative atom, usually oxygen, nitrogen, sulfur, or a halogen. The concept of electrophilicity is relatively simple: an electron-poor atom is an

attractive target for something that is electron-rich, *i.e.* a nucleophile. However, we must also consider the effect of steric hindrance on electrophilicity.

8.3A: Steric hindrance at the electrophile

One of the most important factors to consider when looking at the electrophile in a nucleophilic substitution reaction is *steric hindrance*. Consider two hypothetical S_N2 reactions: one in which the electrophile is a methyl carbon and another in which it is tertiary carbon.

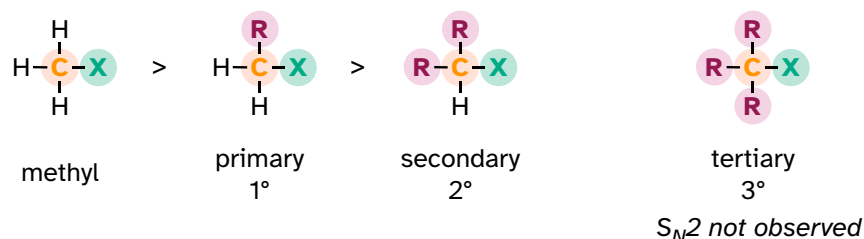
8.3.1



Because the three substituents on the methyl electrophile are hydrogen atoms, the nucleophile has a relatively clear path for a backside attack, and the S_N2 reaction will take place readily. However, a backside attack on the *tertiary* carbon electrophile is blocked by the bulky methyl groups, preventing access to the site of electrophilicity.

S_N2 reactions occur at methyl, primary, and secondary carbon electrophiles. The degree of steric hindrance determines relative rates of reaction: unhindered methyl electrophiles react fastest, and more hindered secondary carbon electrophiles react slowest, assuming all other reaction conditions are identical. S_N2 reactions do *not* occur to an appreciable extent at tertiary carbon electrophiles.

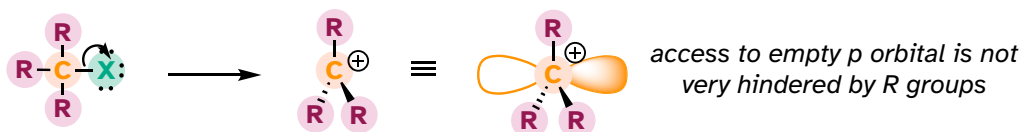
Relative rate of S_N2 reactions:



Exercise 8.8: Which would be expected to react more rapidly in an S_N2 reaction with an azide ion (N_3^-) nucleophile in acetone solvent: 1-bromo-2,2-dimethylbutane or 1-bromo-3-methylbutane?

What about the S_N1 pathway? Steric hindrance around the electrophilic carbon is *not* a significant factor in slowing down an S_N1 reaction. This makes perfect sense from a geometric point of view: the limitations imposed by sterics are significant in an S_N2 displacement because the electrophile being attacked is an sp^3 -hybridized tetrahedral carbon with relatively 'tight' angles of 109.5° . Remember that in an S_N1 mechanism, the leaving group leaves first, and then the nucleophile attacks an sp^2 -hybridized carbocation intermediate, which has trigonal planar geometry with 'open' 120° angles.

8.3.2



With this open geometry, the empty p orbital of the carbocation is no longer significantly shielded from the approaching nucleophile by the bulky alkyl groups and is an 'easy target' for a nucleophile: this step is fast and is *not* the rate-determining step for an S_N1 reaction.

8.3B: Carbocation stability

What, then, are the characteristics of an electrophile that favor an S_N1 reaction pathway as opposed to an S_N2 pathway? We know that the rate-limiting step of an S_N1 reaction is the first step: loss of the leaving group and formation of the carbocation intermediate. Accordingly, ***the rate of an S_N1 reaction depends to a large extent on the stability of the carbocation intermediate.***

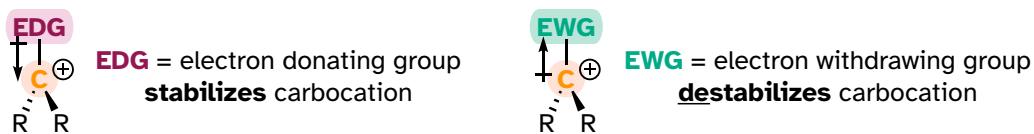
The critical question now becomes:

What stabilizes a carbocation?

Think back to Chapter 7, when we were learning how to evaluate the strength of an acid. The critical question there was: "how stable is the conjugate base that results when this acid donates its proton"? In many cases, this conjugate base was an anion – a center of excess electron density. Anything that can draw some of this electron density away – in other words, any electron withdrawing group – will stabilize the anion.

Conversely, a carbocation is stabilized by an electron-donating group and **destabilized** by an electron-withdrawing group.

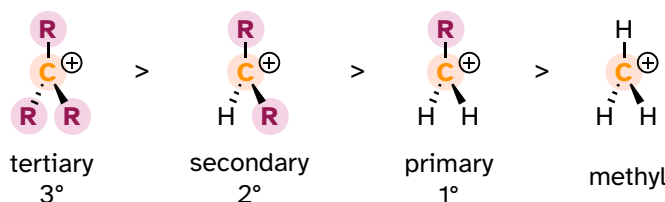
8.3.3



A positively charged species such as a carbocation is electron-poor, and thus anything which donates electron density to the center of electron poverty will help to stabilize it. Alkyl groups, because of the electrons in their carbon-carbon and carbon-hydrogen bonds, are weak electron-donating groups, and will stabilize nearby carbocations. What this means is that, in general, **more substituted carbocations are more stable**: a *tert*-butyl carbocation, for example, is more stable than an isopropyl carbocation. Primary carbocations are highly unstable and not often observed as reaction intermediates; methyl cations are even less stable.

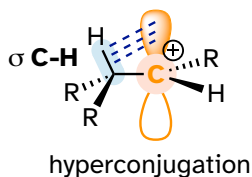
8.3.4

More substituted carbocations are more stable



Another way to explain this trend in carbocation stability involves the phenomenon of **hyperconjugation**, in which the empty *p* orbital of a carbocation is stabilized by overlap with a σ bond on an adjacent carbon. This overlap effectively spreads the positive charge over a larger area. The figure below shows the empty *p* orbital of a secondary carbocation being stabilized by hyperconjugation with an adjacent C-H σ bond.

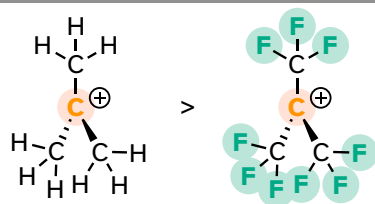
8.3.5



Hyperconjugation is not possible with a methyl cation as there is no adjacent σ bond available to overlap the empty *p* orbital. As the degree of substitution on a carbocation increases, so does the capacity for stabilizing hyperconjugation interactions.

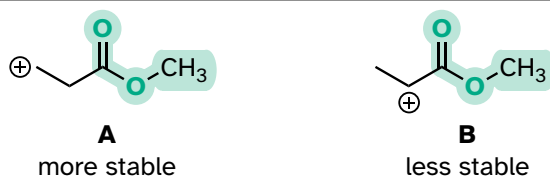
The presence of an electron-withdrawing group - such as a fluorine atom - will significantly *destabilize* a carbocation through the inductive effect.

8.3.6



Carbonyl groups are electron-withdrawing by inductive effects, due to the polarity of the C=O double bond. It is possible to demonstrate in the laboratory that carbocation A below is more stable than carbocation B, even though A is a primary carbocation and B is secondary.

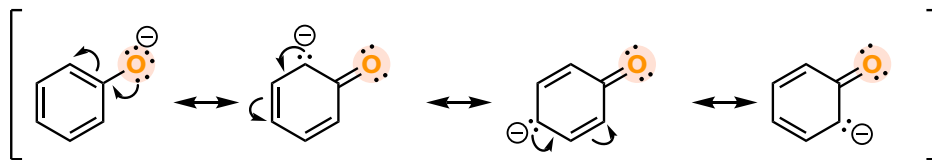
8.3.7



The positive charge in cation B is closer to the electron-withdrawing carbonyl substitution, and as we learned in section 7.3C, the inductive effect of an electron-withdrawing group decreases with distance.

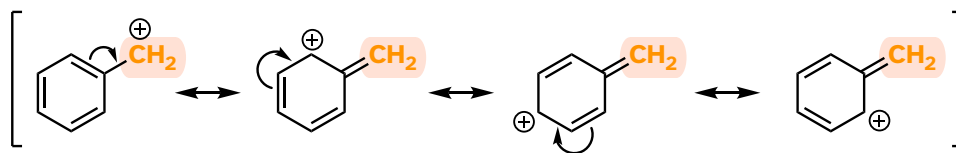
Stabilization of a carbocation can also occur through resonance effects. Recall from section 7.4 that the negative charge on a phenolate ion is stabilized by resonance because the charge can be delocalized to three of the carbons on the aromatic ring.

8.3.8



A positive charge is also stabilized when it can be delocalized over more than one atom. Consider a **benzylic carbocation**, where the positively charged carbon is bonded directly to an aromatic ring. A benzylic carbocation is stabilized by the resonance electron-donating effect of the aromatic ring. Three additional resonance structures can be drawn for the carbocation in which the positive charge is located on one of three aromatic carbons:

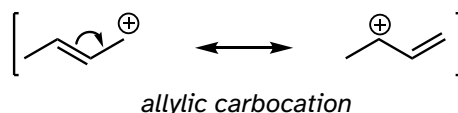
8.3.9



Exercise 8.9: Fill in the missing numbers in this statement: The conjugated π system in the benzylic carbocation above is composed of _____ p orbitals overlapping to share _____ π electrons.

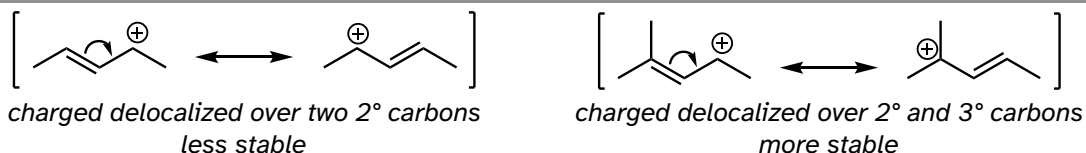
Allylic carbocations, where the positively charged carbon is adjacent to a double bond, are stabilized by resonance delocalization of the positive charge.

8.3.10



Often, we must consider more than one factor when predicting carbocation stability. For example, the carbocation on the right in the figure below is more stable than the carbocation on the left. Both are allylic with the charge delocalized over two carbons, but on the more stable carbocation, one of the carbons is tertiary.

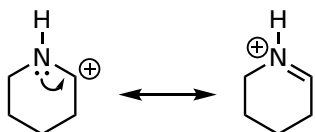
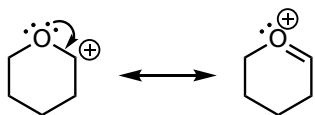
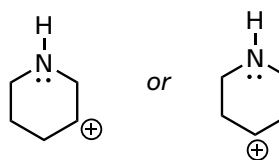
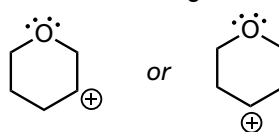
8.3.11



Because heteroatoms such as oxygen and nitrogen are more electronegative than carbon, you might expect that they would be carbocation-destabilizing electron-withdrawing groups. In fact, the opposite is often true: if the oxygen or nitrogen atom is in the right position, the overall effect can be carbocation *stabilization*. Although these heteroatoms are indeed electron-withdrawing groups by induction, they can be electron-donating groups by resonance, and, as we learned earlier (section 7.3) in the context of acid-base chemistry, resonance effects are in general more powerful than inductive effects when the two operate in opposite directions.

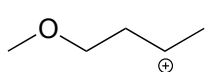
Consider the two pairs of carbocation species below:

8.3.12

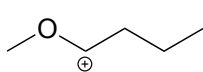
stabilized through resonance*not stabilized through resonance*

In the more stable carbocations, the heteroatom acts as an electron *donating* group by resonance: in effect, the lone pair on the heteroatom is available to delocalize the positive charge. Note also that every atom in the major resonance contributor has a complete octet of valence electrons.

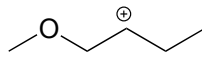
Exercise 8.10: rank the following carbocations from most to least stable:



A



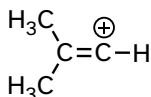
B



C

Finally, **vinyllic** carbocations, in which the positive charge resides on a double-bonded carbon, are highly unstable.

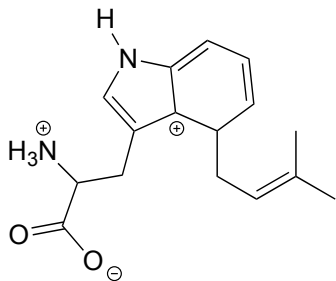
8.3.13



vinyllic carbocation
very unstable

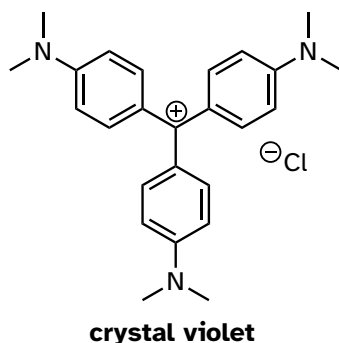
Exercise 8.11: Explain why vinyllic carbocations are unstable. (Hint: think about hybridization and electronegativity)

Exercise 8.12: The carbocation below is an intermediate species in a reaction that is part of the biosynthesis of a hallucinogenic compound in a fungus. Draw a resonance contributor that shows how it is stabilized by resonance with the nitrogen atom.



For the most part, carbocations - even 'relatively stable' carbocations such as those that are tertiary and/or benzylic - are still highly reactive, transient intermediate species in organic reactions, which briefly form and then react again right away. However, there are some unusual examples of carbocation species that are so stable that they can be put in a jar and stored on the shelf as a salt. Crystal violet is the common name for the chloride salt of the carbocation whose structure is shown below. Notice the structural possibilities for extensive resonance delocalization of the positive charge, and the presence of three electron-donating amine groups.

8.3.14

**Exercise 8.13:**

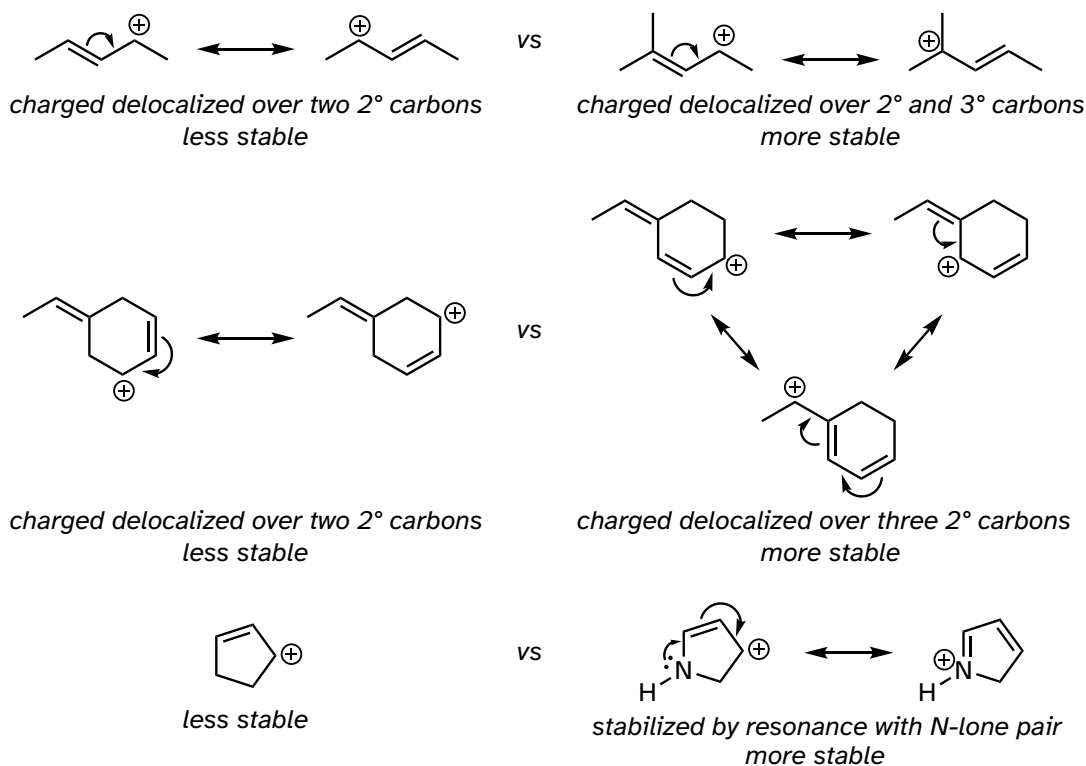
- Draw a resonance structure of the crystal violet cation in which the positive charge is delocalized to one of the nitrogen atoms.
- Notice that crystal violet is deeply colored. Explain why you could have predicted this from looking at its chemical structure.
- The conjugated system of crystal violet consists of how many overlapping p orbitals sharing how many π electrons?

Summary of factors influencing carbocation stability:

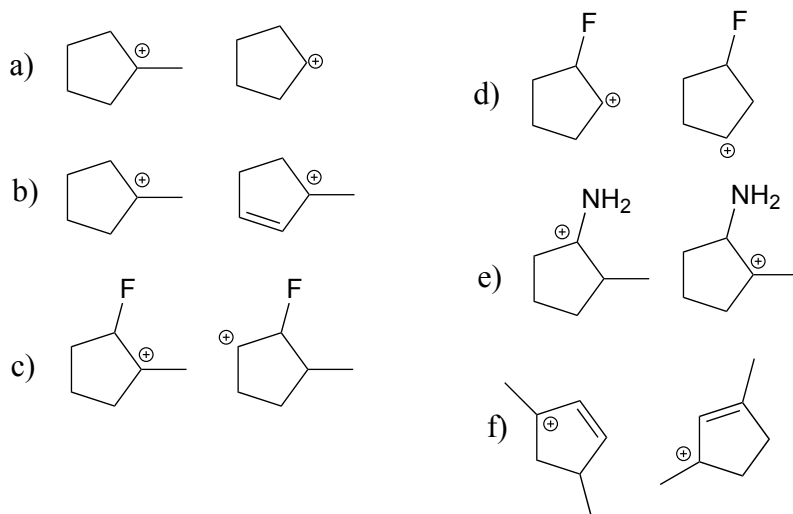
- I: More substituted carbocations are more stable than less substituted carbocation (eg. tertiary carbocations are more stable than secondary carbocations).
- II: Nearby electronegative atoms can decrease carbocation stability by the inductive effect.
- III: Allylic and benzylic carbocations are stabilized by resonance delocalization of the positive charge.
- IV: Delocalization of the positive charge by resonance with the lone pair electrons on a heteroatom contributes to carbocation stability.

Below are three examples illustrating how we can make predictions about relative carbocation stability:

8.3.15



Exercise 8.14: State which carbocation in each pair below is more stable, or if they are expected to be approximately equal. Explain your reasoning.



Now, back to our discussion of the electrophile in an S_N1 reaction:

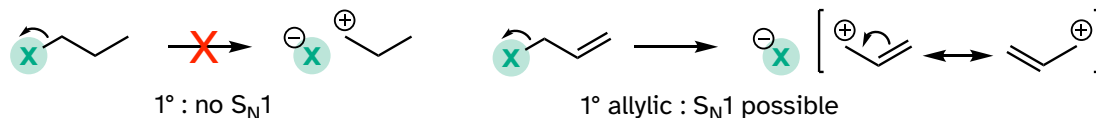
An S_N1 reaction requires a stabilized carbocation intermediate. The more stable the relevant carbocation intermediate, the more favored the S_N1 reaction pathway.

S_N1 reactions in general *do not* occur at methyl or primary carbon electrophiles: the carbocation intermediates involved would be too unstable and the rate-determining (carbocation-generating) step would have a very high energy barrier. Substitution on these electrophiles will occur through the S_N2 pathway.

The S_N1 reaction pathway *is* possible, however, with secondary and tertiary carbon electrophiles, or with any other carbon electrophile in which departure of the leaving group generates a carbocation which is stabilized by resonance.

For example: a primary alkyl bromide would *not* be expected to undergo nucleophilic substitution by the S_N1 pathway. An allylic primary alkyl bromide, on the other hand, would generate a relatively stable allylic carbocation and thus the S_N1 pathway is possible.

8.3.16



An allylic secondary alkyl bromide would undergo S_N1 substitution more rapidly than the allylic primary alkyl bromide, because the relevant carbocation is more substituted and thus more stable.

8.3.17

**sp²-hybridized carbons**

Nucleophilic substitution generally does *not* occur at sp²-hybridized carbons, either by the S_N2 or S_N1 pathway.

8.3.18



Bonds on sp²-hybridized carbons are inherently shorter and stronger than bonds on sp³-hybridized carbons, meaning that it is harder to break the bond between an sp² carbon and a potential leaving group (such as the chlorine atom in the figure above). In addition, steric considerations play a part here: to attack from behind the leaving group in an S_N2-like fashion, the nucleophile would need to approach *in the plane* of the carbon-carbon double bond.

Substitution by an S_N1 pathway is equally unlikely because of the inherent instability of a vinylic (double-bonded) carbocation.

Section 8.4: Leaving groups

Next, we investigate what makes a good leaving group. It's quite straightforward: everything that we learned in chapter 7 about evaluating base strength will apply to leaving groups:

Weaker bases are better leaving groups.

In our general discussion of nucleophilic substitution reactions, we have until now been using chloride ions as our common leaving group. Alkyl chlorides are indeed common reactants in laboratory nucleophilic substitution reactions, as are alkyl bromides and alkyl iodides. Iodide, which is the *least* basic of the four common halides (F, Cl, Br, and I), is the *best* leaving group among them. Fluoride is the least effective leaving group among the halides, because fluoride anion is the most basic. This rule applies to both S_N2 and S_N1 reactions, because in both cases the rate-determining step involves loss of the leaving group.

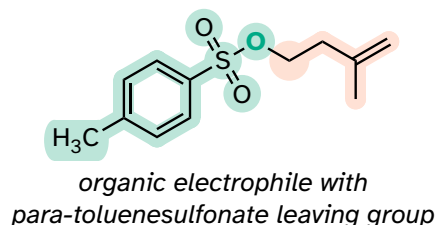
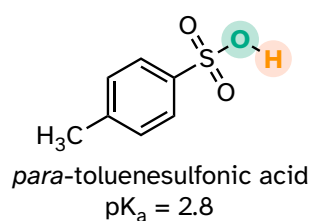
best leaving group $I^- > Br^- > Cl^- > F^-$ worst leaving group

This trend is evident when you compare the relative rates of S_N2 reactions of four halomethanes with a common nucleophile and solvent: iodomethane reacts fastest, fluoromethane the slowest.

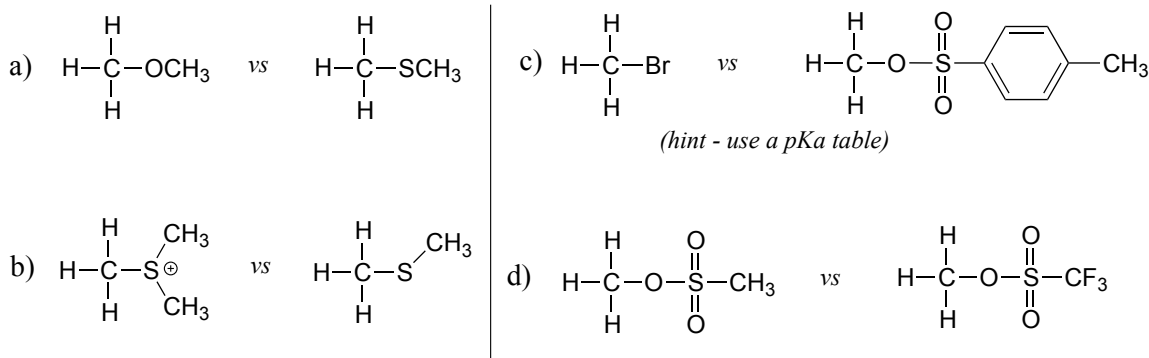
fastest S_N2 reaction $CH_3I > CH_3Br > CH_3Cl > CH_3F$ slowest S_N2 reaction

The conjugate base of toluenesulfonic acid is a leaving group commonly used in the organic synthesis laboratory. Toluenesulfonic acid is a strong organic acid with a pK_a of -2.8, so its conjugate base is a weak base and excellent leaving group.

8.4.1



Exercise 8.15: In each pair (A and B) below, which electrophile would be expected to react more rapidly with cyanide ion nucleophile in acetone solvent? Explain your reasoning.



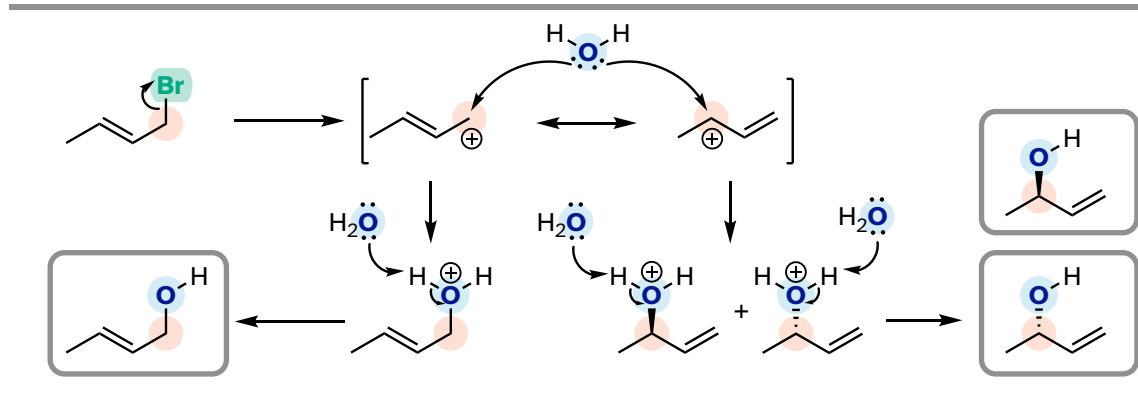
Beginning later in this chapter and throughout the rest of our study of organic reactivity, we will see examples of leaving group 'activation': in other words, conversion of a strong base/poor leaving group into a weak base/good leaving group. In some cases, this is as simple as protonation: an acidic group may be positioned in the active site in order to protonate a poor leaving group (e.g., hydroxide ion in the case of an alcohol) as it leaves, thus converting it into a weak base and good leaving group. In many other enzymatic reactions, alcohols are converted into phosphates, which can be excellent biochemical leaving groups.

We will learn much more about the structure and reactions of organic phosphate compounds in chapter 9.

Section 8.5: Regiochemistry of S_N1 reactions with allylic electrophiles

S_N1 reactions with allylic electrophiles can often lead to more than one possible regiochemical outcome - resonance delocalization of the carbocation intermediate means that more than one carbon is electrophilic. For example, hydrolysis of this allylic alkyl bromide leads to a mixture of primary and secondary allylic alcohols.

8.5.1



In an enzyme-catalyzed reaction of this kind, however, generally only one product will form, because enzymes maintain strict control over the regiochemistry and stereochemistry of the reactions they catalyze. The nucleophilic and electrophilic substrates are bound specifically in the active site so that nucleophilic attack is directed at one - and only one - electrophilic carbon. Problem 15, 17, and 19 at the end of this chapter provide some examples of regio- and stereospecific biochemical substitution reactions at allylic carbon electrophiles.

Section 8.6: S_N1 or S_N2 ? Predicting the mechanism

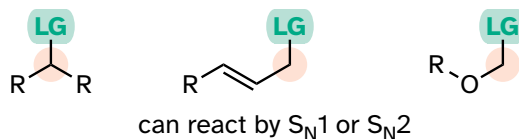
First, it is important to understand that the S_N1 and S_N2 mechanism models are just that: models. While many nucleophilic substitution reactions can be described as proceeding through 'pure' S_N1 or S_N2 pathways, other reactions - some important biochemical reactions we'll see later - lie somewhere in the continuum between the S_N1 and the S_N2 model (more on this later). Here are some guidelines to help you predict whether a reaction is likely to have more of an S_N1 or S_N2 character.

First, look at the electrophile: as stated above, an S_N1 reaction requires that a relatively **stable carbocation intermediate** be able to form. An S_N2 reaction requires a relatively **unhindered electrophilic center**. Therefore, methyl and

primary carbon electrophiles will react by the S_N2 pathway, and tertiary carbon electrophiles will react by the S_N1 pathway.

Secondary carbon electrophiles, or primary carbon electrophiles adjacent to a potential carbocation-stabilizing group (double bond or heteroatom) can react by either or both pathways. The reasoning here is that these electrophiles are unhindered (favoring S_N2), but can also form stabilized carbocation intermediates (favoring S_N1)

8.6.1



Next, look at the nucleophile. More powerful nucleophiles, particularly anionic nucleophiles such as hydroxides, alkoxides or thiolates, favor an S_N2 pathway: picture the powerful nucleophile 'pushing' the leaving group off the electrophile. Weaker, uncharged nucleophiles like water, alcohols, and amines, favor the S_N1 pathway: they are not nucleophilic enough to displace the leaving group, but will readily attack a carbocation intermediate.

Finally look at the solvent in the reaction. As a rule, water and other protic solvents (for example methanol or ethanol) favor S_N1 pathways, due to the ability of the solvents to stabilize carbocation intermediates, combined with their tendency to weaken the nucleophile by enclosing it in a 'solvent cage'. In laboratory reactions, the presence of a polar aprotic solvent such as acetone or dimethylformamide points to the probability of an S_N2 reaction.

Factors favoring the S_N1 pathway:

hindered electrophile
 potential for a tertiary, secondary, or resonance-stabilized carbocation intermediate
 uncharged nucleophile
 protic solvent such as water

Factors favoring the S_N2 pathway:

Unhindered (methyl or primary) electrophile
 powerful, anionic nucleophile
 polar aprotic solvent

[Video tutorial: nucleophilic substitution reactions](#)

Section 8.7: Biological nucleophilic substitution reactions

The nucleophilic substitution reactions we have seen so far have all been laboratory reactions, rather than biochemical ones. Now, finally, let's look at a few examples of nucleophilic substitutions in a biological context. All the principles we have learned so far still apply to these biochemical reactions, but in addition we need to consider the roles of the enzyme catalysts.

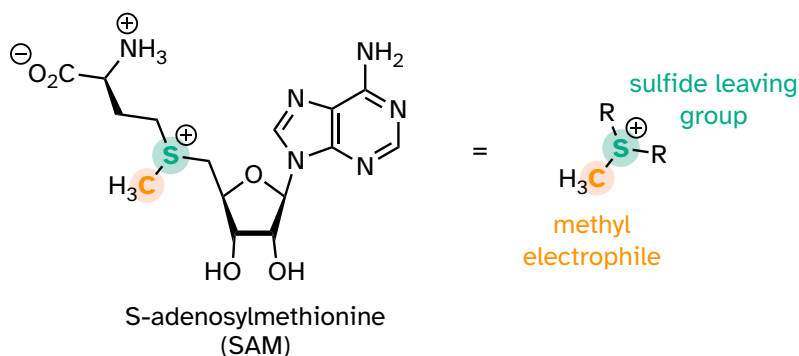
A word of encouragement:

This is the first time that we will be seeing 'real' biological organic reaction mechanisms. **Do not be intimidated by the size and complexity of the reacting biomolecules** - they are just organic molecules, with the same bonding patterns and functional groups that you are already familiar with. Focus on the *reacting* parts of the molecule: What is the nucleophile? The electrophile? The leaving group? In most biological organic reactions, the main bulk of the biomolecule is just 'going along for the ride' and can often be abbreviated with an 'R group' (section 1.2C) to simplify the picture.

8.7A: A biochemical S_N2 reaction

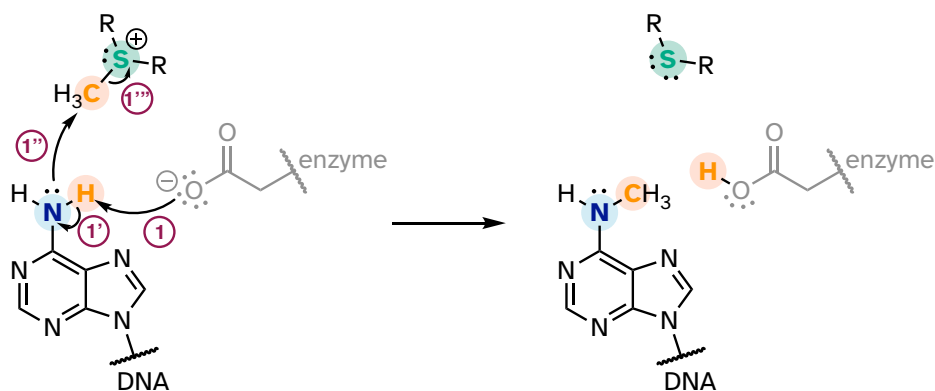
One very important class of nucleophilic substitution reactions in biochemistry are the S_N2 reactions catalyzed by **S-adenosyl methionine** (SAM) – dependent **methyltransferase** enzymes. SAM is a coenzyme (section 6.3) that plays the role of methyl group donor: you can think of SAM in this context as being simply a methyl carbon electrophile attached to a sulfide leaving group.

8.7.1



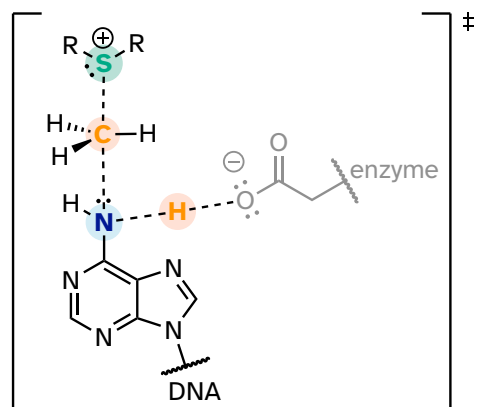
There are many variations of SAM-dependent methylation reactions in nature. In the introduction to this chapter, we were introduced to a reaction occurring in bacterial DNA in which a methyl carbon is transferred from SAM to a nitrogen atom on adenine (this type of reaction is often referred to as *N*-methylation).

8.7.2



In the figure above, we are showing how an aspartate residue in the active site of the enzyme acts as a catalytic base: transfer of a proton from substrate to the aspartate side chain begins to enhance the nucleophilicity of the amine nitrogen as it approaches the electrophilic methyl carbon of SAM, and formation of the new N-C bond and cleavage of the C-S bond begins. These four bond-rearranging events probably take place in concerted fashion. A likely transition state is approximated below:

8.7.3



Of course, there are many other noncovalent interactions between active site enzyme residues and the substrate (the adenine base) and cofactor (SAM), but in the interest of clarity these are not shown. These interactions, many of which are hydrogen-bonds, help to position the adenine base and SAM in just the right relative orientation inside the active site for the nucleophilic attack to take place. (If you have access to American Chemical Society journals, a paper about an enzyme catalyzing a similar *N*-methylation reaction contains some detailed figures showing hydrogen-bond and charge-dipole interactions between the enzyme active site and the two substrates: see [Biochemistry 2003, 42, 8394](#), figure 4).

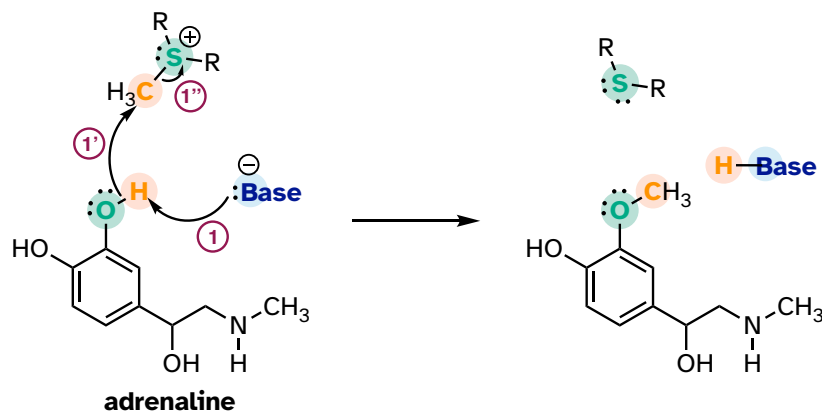
The electrophile is a methyl carbon, so there is little steric hindrance to slow down the nucleophilic attack. The carbon is electrophilic (electron-poor) because it is bonded to a positively charged sulfur, which is a powerful electron withdrawing group. The positive charge on the sulfur also makes it an excellent leaving group, because as it leaves, it becomes a neutral and very stable sulfide. All in all, we have a good nucleophile (enhanced by the catalytic base), an unhindered electrophile, and an excellent leaving group. We can confidently predict that this reaction is S_N2 . An S_N1 mechanism is extremely unlikely: a methyl cation is very unstable and thus is not a reasonable intermediate to propose.

Notice something else about the SAM methylation mechanism illustrated in the previous figure. It is *termolecular*: there are *three* players acting in concert: the catalytic base, the nucleophile, and the electrophile. This is possible because all three players are bound in a very specific geometry in the active site of the enzyme. In a reaction that takes place free in solution, rather than in an active site, the likelihood of three separate molecules colliding all at once, with just the right geometry for a reaction to take place, is very, very low. You should notice going forward that when we illustrate the mechanism of a reaction that takes place free in solution, we will only see *bimolecular* steps - *two* molecules colliding. Almost all the biochemical reactions we see in this book will be enzyme-catalyzed - and termolecular steps will be common - while almost all the laboratory reactions we see will take place free in solution, so we will only see unimolecular and bimolecular steps. (Synthetic chemists often employ non-biological catalysts that mimic enzyme active sites, but these examples are well beyond the scope of our discussion).

Exercise 8.16: Think back to the acid-base chapter: the pKa of a protonated ether is approximately zero, indicating that an ether is a very weak base. Considering periodic trends in acidity and basicity, what can you say about the relative basicity of a sulfide?

Another SAM-dependent methylation reaction is catalyzed by an enzyme called catechol-O-methyltransferase. The substrate here is epinephrine, also known as adrenaline, and the reaction is part of the pathway by which adrenaline is degraded in the body.

8.7.4



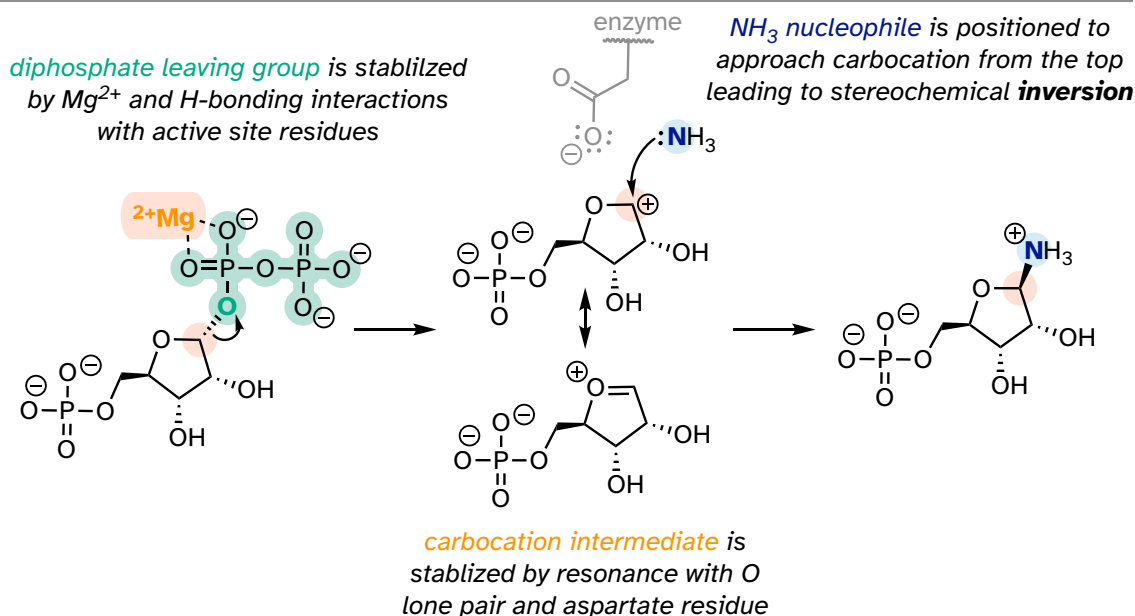
Notice that in this example, the attacking nucleophile is a phenol oxygen rather than a nitrogen (that's why the enzyme is called an O-methyltransferase). In many cases when drawing biochemical reaction mechanisms, we use the abbreviations B: for a catalytic base and H-A for a catalytic acid, to keep the drawings from getting too 'busy' (it's also possible that the identity of the acidic or basic group may not be known).

Exercise 8.17: SAM is formed by a nucleophilic substitution reaction between methionine and adenosine triphosphate (ATP). Draw a mechanism for this reaction and explain why you chose either an S_N1 or an S_N2 pathway.

8.7B: A biochemical S_N1 reaction

As we will see in chapter 10, enzyme-catalyzed S_N1 reactions play a critical role in carbohydrate and DNA/RNA nucleotide metabolism. The reaction below is part of nucleotide biosynthesis:

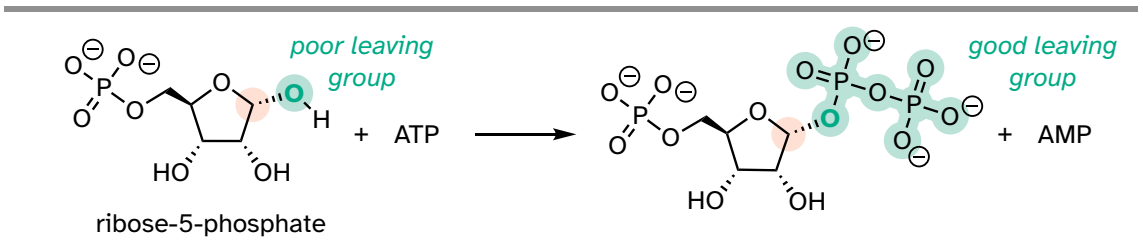
8.7.5



Notice a few things here: first, the diphosphate leaving group is stabilized by interactions with Mg^{2+} ion bound in the active site and by hydrogen-bonding with active site amino acid residues (not shown). The carbocation intermediate is stabilized by resonance with the lone pairs on the oxygen (see section 8.5), and by an active site aspartate side chain. The ammonia nucleophile is positioned in the active site so that it approaches from the 'top' side of the planar carbocation intermediate, and the substitution results in an inversion of configuration. Remember: S_N1 reactions which occur free in solution tend to result in a mixture of stereoisomers, but enzyme-catalyzed reactions - including enzymatic S_N1 reactions such as this one - are generally stereo- and regio-specific, meaning that they almost always result in a *single* isomeric product, not a mixture of products.

Recall the statement from section 8.4 that poor leaving groups often need to be converted into good leaving groups. Backing up one metabolic step from the reaction depicted above, we see that a poor (hydroxide) leaving group on ribose-5-phosphate is first converted to a good (diphosphate) leaving group, which can be stabilized through interactions with the active site of the enzyme catalyzing the S_N1 reaction.

8.7.6

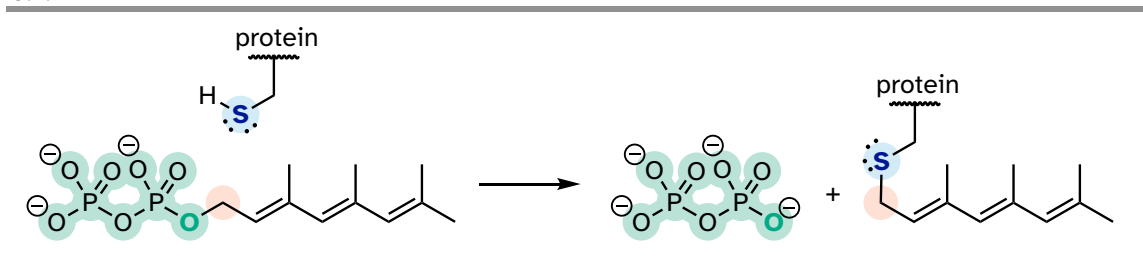


This preliminary phosphorylation step, which requires ATP (adenosine triphosphate) as the donor of the diphosphate group, is a reaction that we will study in much more detail in chapter 9.

8.7C: A biochemical S_N1/S_N2 hybrid reaction

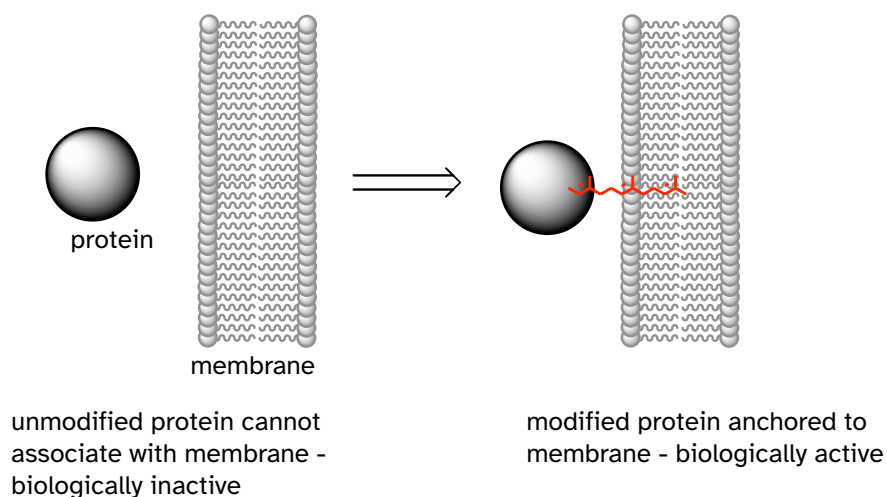
The cysteine residues of certain proteins are modified by addition of a 15-carbon isoprene chain (section 1.3A) to the side chain thiol group.

8.7.7



The mechanistic details of this reaction are of particular interest to biomedical scientists. The proteins that are substrates for this type of modification are involved in cell signaling processes, and they are not able to carry out their biological functions unless they are anchored to a cell's lipid membrane. The hydrocarbon group that becomes attached to a cysteine residue in this reaction serves as the anchor.

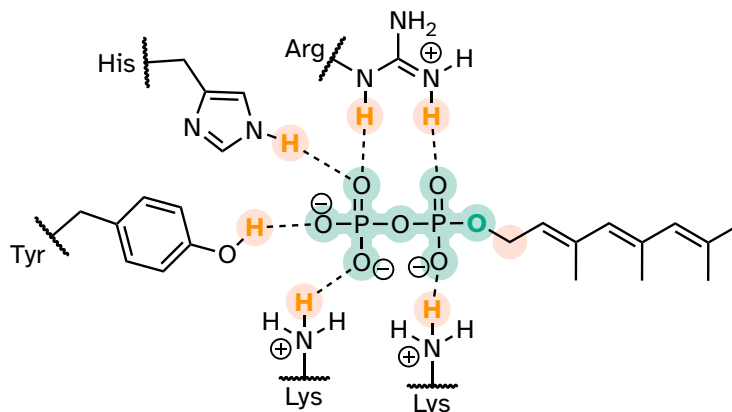
8.7.8



Some of these proteins have been implicated in tumor formation. Scientists hope that if they can find a way to shut down the cysteine modification reaction, the tumor-causing proteins will not be able to anchor to cell membranes and thus will remain inactive. The search is on for an effective inhibitor of this enzyme to serve as a potential anti-tumor drug.

How does the enzyme lower the energy barrier for this reaction? Experimental evidence indicates that when a substrate protein is bound to the active site of the enzyme, the cysteine thiol associates with a zinc ion bound in the active site. As we learned in section 7.8, this association will lower the pKa of the thiol to the point where it loses a proton and exists as a thiolate anion in the active site - a thiolate is a very potent nucleophile! Studies also show that the diphosphate group forms stabilizing interactions with several amino acid residues (two lysines, an arginine, a histidine, and a tyrosine) in the enzyme's active site, making it a weaker base and thus a better leaving group.

8.7.9



Biochemistry **1998**, 37, 16601

Is protein prenylation an S_N1 or S_N2 reaction? In other words, to what extent does the nucleophile displace, or 'push' the leaving group off, or to what extent does the leaving group leave on its own, without a 'push' from the nucleophile? Along the same lines, to what extent does a positive charge develop on the carbon center (development of a full positive charge implies an S_N1 mechanism). First, consider the electrophile: it is a primary allylic carbon, so either pathway is possible (it is relatively unhindered for S_N2 attack, but could also form a resonance-stabilized carbocation intermediate in an S_N1 pathway). The nucleophile is a very powerful thiolate ion, suggestive of an S_N2 mechanism where a strong nucleophile actively displaces the leaving group.

In fact, experiments designed to address this very question (see problem P8.19) have provided evidence that the reaction is a mechanistic hybrid: essentially S_N2 , but with *elements* of S_N1 . In other words, at the transition state the electrophilic carbon takes on some degree of positive charge, but a true carbocation intermediate does not form. The take-home message here is that the S_N1 and S_N2 mechanistic pictures we have studied in this chapter are models, and while they are useful for learning about chemical principles and accurate for describing many substitution reactions, other reactions are not necessarily 'pure' S_N1 or S_N2 , but lie somewhere in between.

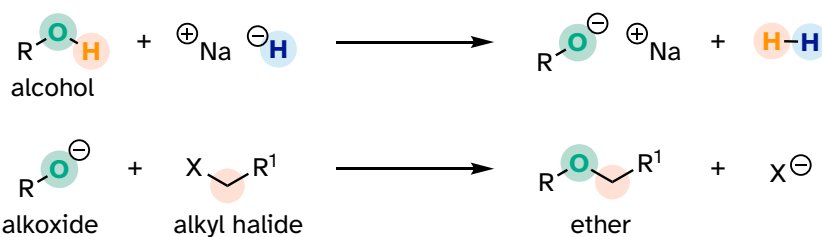
Section 8.8: Nucleophilic substitution in the organic synthesis laboratory

8.8A: The Williamson ether synthesis

Synthetic organic chemists often make use of a reaction that is conceptually very similar to the SAM-dependent methylation reactions we saw earlier. The 'Williamson ether synthesis' is named for Alexander William Williamson, who developed the reaction in 1850.

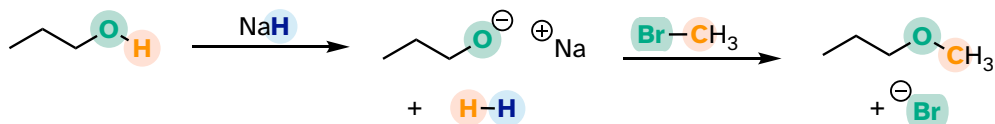
In the Williamson ether synthesis, an alcohol is first deprotonated by a strong base, typically sodium hydride. An alkyl halide is then added to the reaction mixture, and the alkoxide ion, a powerful nucleophile, displaces the halide leaving group in an S_N2 reaction.

8.8.1



For example, below we see methyl bromide performing the role of methyl group donor, analogous to the role played by SAM in biochemical methylation reactions:

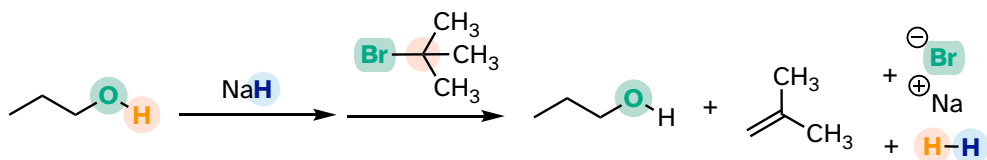
8.8.2



Notice the difference between this non-biological laboratory reaction and the biological, enzyme-catalyzed SAM methylation reaction we saw earlier. Deprotonation of the nucleophile occurs as a separate step before the nucleophile attacks. Contrast this solution reaction (with two bimolecular steps) to the enzyme catalyzed S_N2 reaction (SAM methylation) we saw earlier, which involves a single, concerted trimolecular step. Also notice that this non-biological reaction involves a highly basic reagent (sodium hydride) and intermediate (propoxide anion), which would be unreasonable to propose for a reaction taking place under physiological conditions.

The Williamson ether synthesis will only work with methyl or primary alkyl halides. If a secondary or tertiary alkyl halide is used, the result will be formation of an *alkene* in what is called an 'elimination' reaction:

8.8.3



We will study elimination reactions in chapter 14.

Exercise 8.18: A rookie organic chemist ran the reaction shown above, hoping to synthesize an ether. Instead, he got the alkene shown. What alkyl halide/alcohol combination should he have used instead to get the ether product he was trying for?

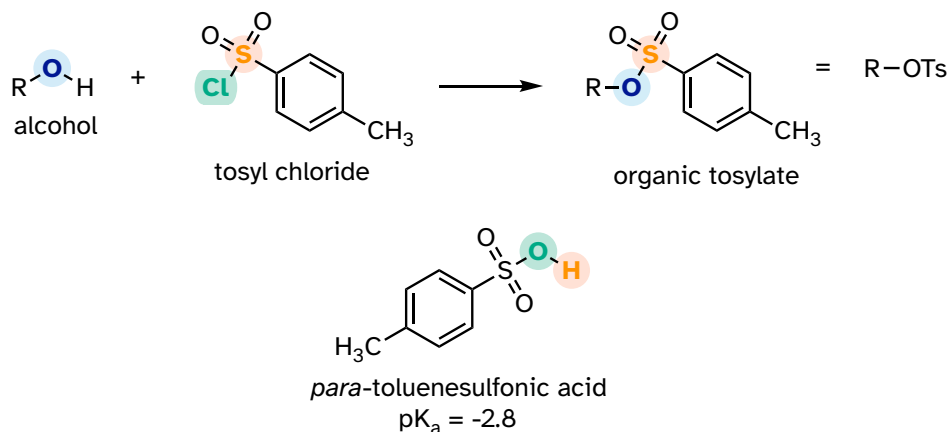
8.8B: Turning a poor leaving group into a good one – tosylates

In section 8.4 it was mentioned how, in metabolic pathways, the relatively poor OH leaving group of an alcohol can be converted into a phosphate or diphosphate, which when stabilized by noncovalent interactions inside an enzyme active site can be a very good leaving group.

In laboratory synthesis, a similar goal can be accomplished by converting an alcohol (a poor leaving group) to an organic **tosylate** (a good leaving group) using tosyl chloride (the terms 'tosylate' and 'OTs', are abbreviations for *para*-toluene sulfonate). The alcohol-to-tosylate reaction is not something we are equipped yet

to understand, but if we consider that the pK_a of *para*-toluene sulfonic acid is -2.8, we realize that the *para*-toluene sulfonate anion is a very weak base and thus a very good leaving group. Conversion of alcohols to organic tosylates is a very common step in organic synthesis schemes.

8.8.4



End of Chapter Self-Check List

Check your progress towards success. Verify that after completing this chapter you can:

Nucleophilic substitution basics:

- Draw a complete mechanism for an S_N2 reaction
- Draw the transition state for an S_N2 reaction
- Identify a **nucleophile**, **electrophile**, **leaving group**, and **reaction intermediates**
- Recognize that S_N2 reactions result in inversion of configuration at the electrophilic carbon and apply this concept to predict the stereochemistry of the product.
- Draw a complete mechanism for an S_N1 reaction, in particular a hydrolysis or other solvolysis S_N1 reaction.
- Draw an energy diagram illustrating the energy profile of a typical S_N1 solvolysis reaction.
- Recognize all transition states that are part of an S_N1 reaction.
- Know that *non-enzymatic* S_N1 reactions result in both inversion and retention of configuration (racemization) at the electrophilic carbon. *Enzymatic* S_N1 reactions are stereospecific, usually resulting in inversion at the electrophilic carbon.

Nucleophiles:

- Recognize the nucleophile, electrophile, and the leaving group in an S_N1 or S_N2 reaction.
- Identify factors that influence nucleophilicity and evaluate the relative nucleophilicity of two or more nucleophiles.
- Predict relative rates of S_N2 reactions of a given electrophile with different nucleophiles.
- Recognize that *in most cases anything that makes something a stronger base also makes it a more powerful nucleophile* – apart from the vertical periodic trend in protic solvents.
- Recall and explain the following trends in nucleophilicity:

- The horizontal periodic trend: for example, NH_3 is a better nucleophile than H_2O .
- The vertical periodic *for reactions in polar aprotic solvents*: chloride ion is a better nucleophile than bromide ion in acetone solvent.
- Protonation state: for example, hydroxide ion is a better nucleophile than water.
- Inductive effect: electron-withdrawing groups decrease nucleophilicity
- Resonance effects: Delocalization of negative charge/electron density decreases nucleophilicity. For example, methoxide ion (CH_3O^-) is a stronger nucleophile than acetate ion.
- Steric effects: less sterically hindered nucleophiles are more reactive. For example, ethanol is less hindered and more nucleophilic than *tert*-butyl alcohol.
- The vertical periodic trend *in protic solvent* (water or alcohol) is opposite the trend in basicity: for example, thiols are more nucleophilic than alcohols.

Electrophiles

- Recognize that electrophiles are electron-deficient atoms: for our present purposes, this means a carbon bonded to an electronegative atom.
- Recognize that less hindered electrophiles will react faster in $\text{S}_{\text{N}}2$ reactions: for example, chloromethane is a better electrophile than a primary alkyl chloride.

Leaving groups

- Recognize trends in leaving groups parallel trends in basicity. *A good leaving group is a weak base.*
- Recall common laboratory leaving groups and explain their reactivity: halides and para-toluenesulfonate (abbreviated tosyl, or OTs).
- Recall common biochemical leaving groups and explain their reactivity: phosphates and sulfide.

Carbocation stability

- Recognize factors that destabilize a negative charge and stabilize a positive charge.
- Identify factors influencing the stability carbocations:
 - A higher degree of substitution: for example, a tertiary carbocation is more stable than a secondary carbocation.

- Allylic and benzylic carbocations, in which the positive charge is delocalized by resonance, are relatively stable.
- The presence of electron-withdrawing groups (by inductive or resonance effects) decreases carbocation stability.
- The presence of electron-donating groups (by inductive or resonance effects) increases carbocation stability.
- The presence of a heteroatom can stabilize a nearby carbocation by the resonance-based electron-donating effect. Otherwise, heteroatoms act as weakly electron-withdrawing carbocation-destabilizing groups by inductive effects

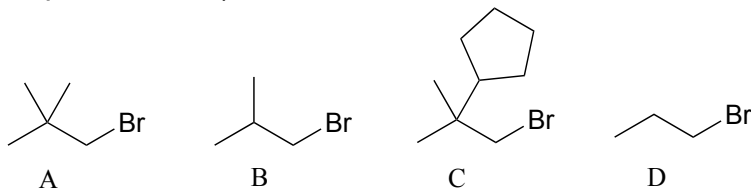
General concepts and skills

- Predict whether a given substitution reaction is likely to proceed by S_N2 or S_N1 mechanisms, based on the identity of the nucleophile, the electrophile, and the solvent.
 - S_N2 reactions involve strong nucleophiles and unhindered electrophiles, and are accelerated by the use of polar, aprotic solvents.
 - S_N1 reactions involve weaker nucleophiles relatively stable carbocations, and are accelerated by protic solvents.
- Predict the product(s) of a nonenzymatic substitution reaction, given a nucleophile and electrophile and predict a reasonable mechanism (S_N1 or S_N2). Predict different regiochemical and stereochemical outcomes leading to the formation of more than one product.
- Identify starting compounds in a substitution reaction given a product or products.
- Recognize and draw a complete mechanism for a biochemical nucleophilic substitution reaction. Be able to evaluate the nucleophile, electrophile, and leaving the group in the reaction, and predict whether the reaction is likely to have more S_N2 or S_N1 character.
- Describe how S-adenosylmethionine (SAM) acts as a methyl group donor in biochemical S_N2 reactions.
- Select appropriate alkyl halide and alcohol starting compounds to synthesize a given ether product, using the Williamson ether synthesis procedure.

If you didn't check off all items on this list, practice more and reach out to your instructional team for additional help

Problems

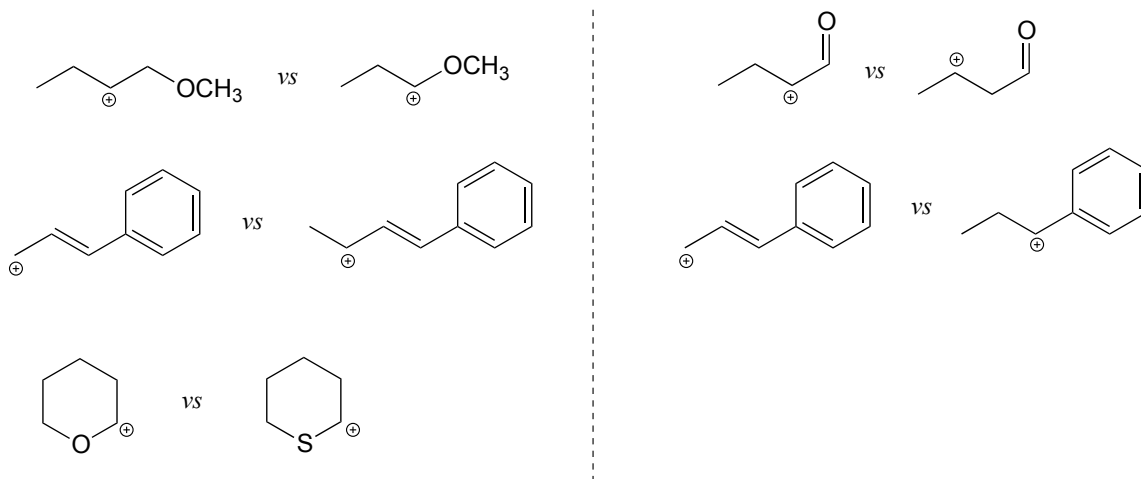
P8.1: Rank the following molecules in order of how fast they would be expected to react with CH_3SNa in acetone. (CH_3SNa is simply the sodium salt of CH_3S^- . Na^+ is a spectator ion.)



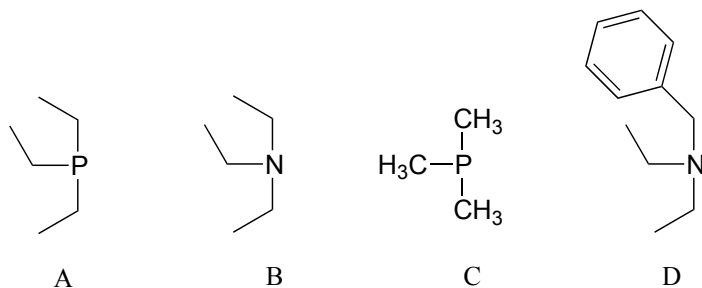
P8.2: Draw line structures representing the *most stable* cation with the given molecular formula:

- a) C_3H_7^+ b) C_4H_9^+ c) $\text{C}_3\text{H}_8\text{N}^+$ d) C_4H_7^+

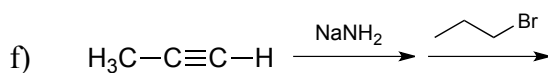
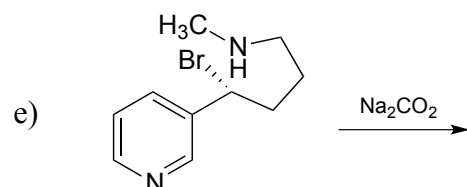
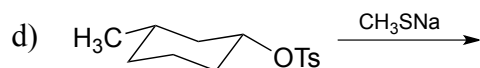
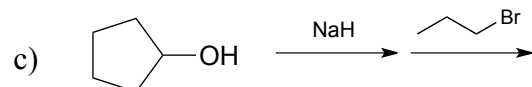
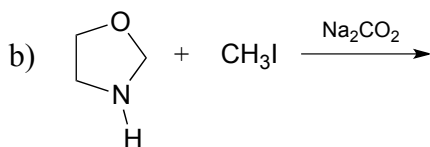
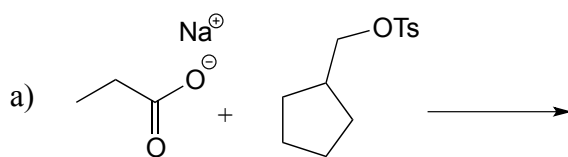
P8.3: For each pair of carbocations below, choose the one that is more stable, and explain your reasoning.



P8.4: Arrange the following species in order of increasing nucleophilicity in protic solvent:



P8.5: Predict the organic products of the following nucleophilic substitution reactions, all of which are carried out in polar aprotic solvent. Show stereochemistry at chiral carbons. Hints: Na_2CO_3 , sodium carbonate, is a weak base. For part (f): What is the conjugate acid of NH_2^- ? What is the pK_a of this conjugate acid, and what is the pK_a of a terminal alkyne?



P8.6: Which of the reactions in the previous problem has a *unimolecular* rate determining step? Explain.

P8.7: From the following pairs, select the compound that would react more rapidly with bromomethane in acetone solvent.

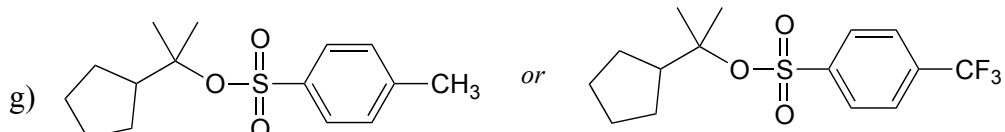
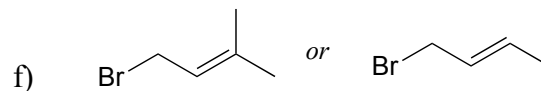
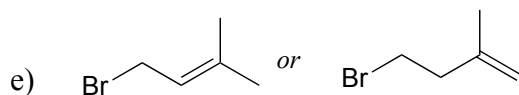
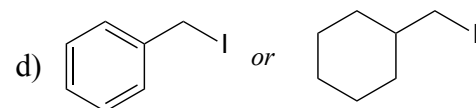
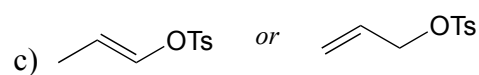
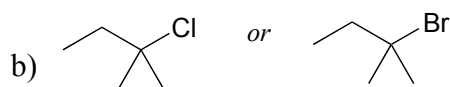
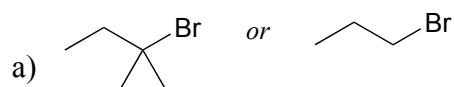
- a) water or hydroxide ion
- b) CH_3S^- or CH_3OH
- c) CH_2S^- or CH_3SH
- d) acetate ion or hydroxide ion
- e) diethyl sulfide or diethyl ether
- f) dimethylamine or diethylether
- g) trimethylamine or 2,2-dimethylpropane

P8.8: Methyl iodide (0.10 mole) is added to a solution that contains 0.10 mole NaOCH_3 and 0.10 mole NaSCH_3 .

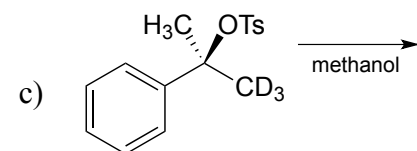
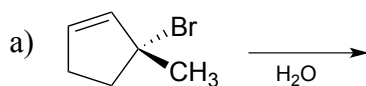
a) Predict the most abundant neutral organic product that would form and explain your reasoning.

b) Assume that you isolate a mixture of the major product (which you predicted in part) along with a smaller amount of a different nucleophilic substitution product. Explain briefly but specifically how you could use $^1\text{H-NMR}$ to determine the ratio of the two products in the mixture.

P8.9: For each pair of compounds, predict which will more rapidly undergo solvolysis in methanol solution.

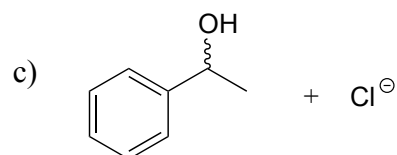
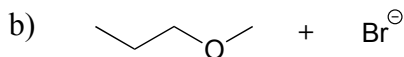
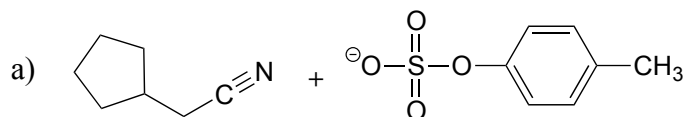


P8.10: Predict the solvolysis product(s) of each of the reactions below. Consider both regiochemistry and stereochemistry.

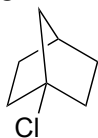


e) Draw a complete curved-arrow mechanism for the formation of the secondary allylic alcohol product in part (a).

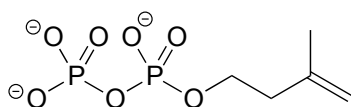
P8.11: Show starting compounds that would lead to the following products through nucleophilic substitution reactions.



P8.12: The fused ring compound shown below is very unreactive to nucleophilic substitution, even with a powerful nucleophile. Explain. (Hint – consider bond geometry - a model will be very helpful!)



P8.13 Laboratory synthesis of isopentenyl diphosphate - the 'building block' molecule used by nature for the construction of isoprenoid molecules (section 1.3A) - was accomplished by first converting isopentenyl alcohol into an alkyl tosylate then displacing the tosylate group with an inorganic pyrophosphate nucleophile. Based on this verbal description, draw a mechanism for the second (nucleophilic substitution) step, showing starting and ending compounds for the step and curved arrows for electron movement



isopentenyl diphosphate

P8.14: Choline, an important neurotransmitter in the nervous system, is formed from 2-(*N,N*-dimethylamino)ethanol:

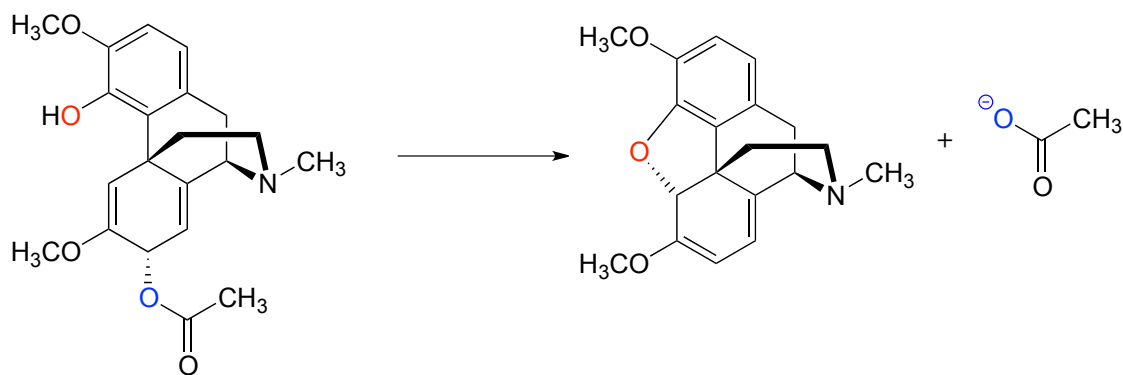


a) Besides the enzyme and the starting compound, what other important biomolecule do you expect to play a part in the reaction?

b) Draw a mechanism for the reaction.

c) Briefly explain how $^1\text{H-NMR}$ could be used to distinguish between the substrate and the product of this reaction.

P8.15 The following is a reaction in the biosynthesis of morphine in opium poppies.



a) Draw a complete mechanism, assuming an $\text{S}_{\text{N}}1$ pathway.

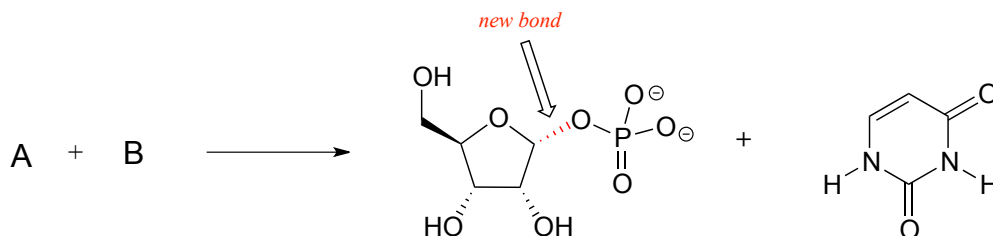
b) What would you expect to be the most noticeable difference between the IR spectrum of the product and that of the substrate?

c) This reaction is an example of the regioselectivity of enzymatic nucleophilic substitution reactions noted earlier in the chapter. Draw two alternate nucleophilic, ring-closing steps for this reaction (leading to different products from what is shown above) and explain why these alternate pathways are both less favorable than the actual reaction catalyzed by the enzyme.

P8.16: The enzymatic reaction below, which is part of the metabolism of nucleic acids, proceeds by an $\text{S}_{\text{N}}1$ mechanism. The new bond formed in the substitution is indicated.

a) Predict the structures of the two substrates A and B.

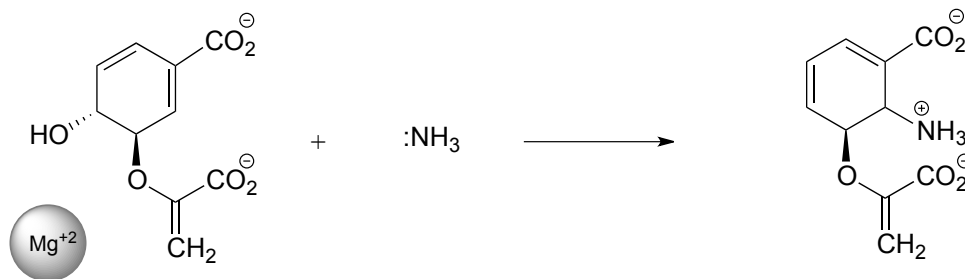
b) Draw a complete mechanism and use resonance drawings to illustrate how both the carbocation intermediate and the leaving group are stabilized.



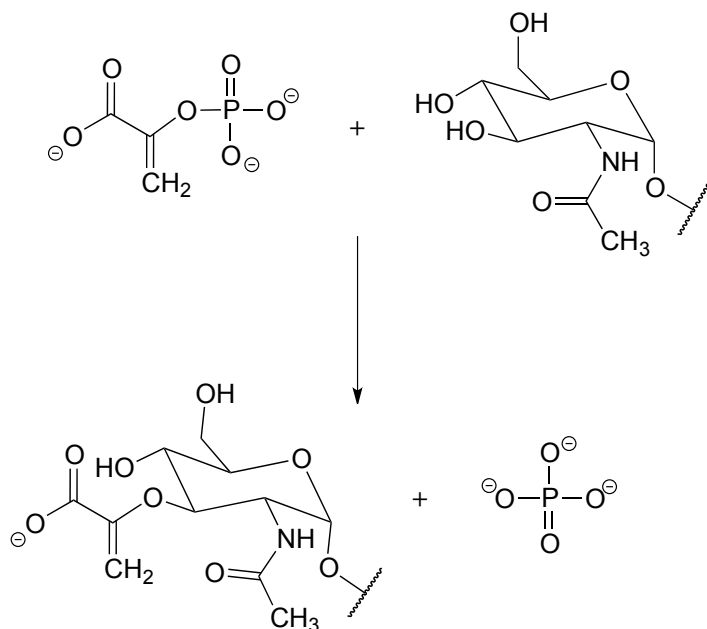
P8.17: Below is the first step of the reaction catalyzed by anthranilate synthase, an enzyme involved in biosynthesis of the amino acid tryptophan.

a) This reaction is somewhat unusual in that the leaving group is a hydroxide anion, which is of course normally thought to be a very poor leaving group. However, studies show that an Mg^{+2} ion is bound in the active site close to the hydroxide. Explain how the presence of the magnesium ion contributes to the viability of hydroxide as a leaving group.

b) Draw a complete mechanism for the reaction, assuming an $\text{S}_{\text{N}}1$ pathway.

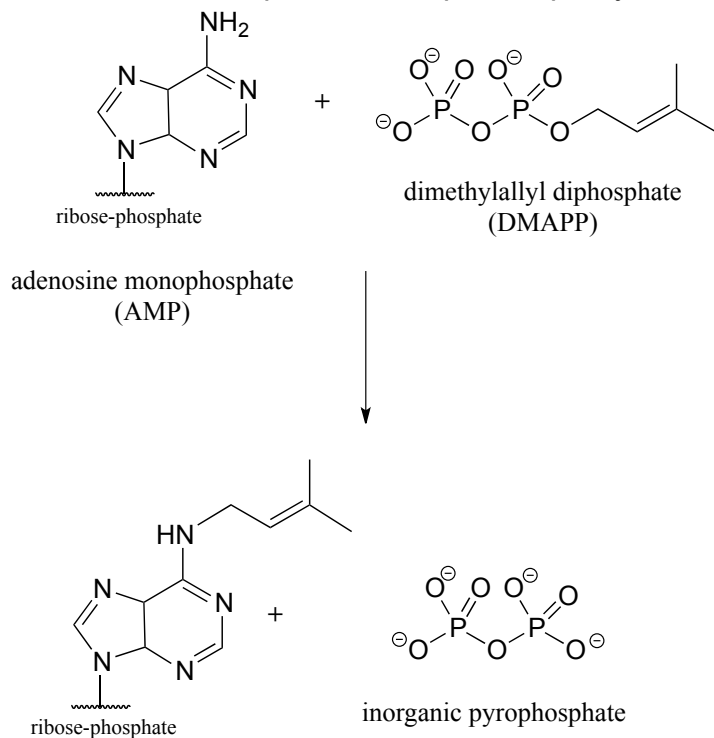


P8.18: The reaction below is part of the biosynthesis of peptidoglycan, a major component of bacterial cell walls. Is it likely to proceed by a nucleophilic substitution mechanism? Explain.

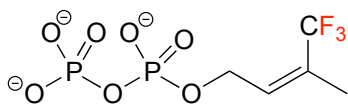


P8.19: Compare the reaction below, catalyzed by the enzyme AMP-DMAPP transferase, to the protein prenyltransferase reaction we learned about in section 8.8C, the mechanism of which, as we discussed, is thought to be *mostly* S_N2 -like with some S_N1 -like character.

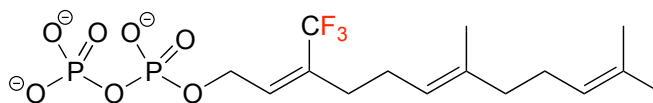
a) Is the AMP-DMAPP transferase reaction below likely to have more or less S_N1 -like character compared to the protein prenyltransferase reaction? Explain.



b) Given your answer to part (a), which reaction is likely to be more dramatically slowed down when a fluorinated isoprenoid substrate analog is substituted for the natural substrate? Explain.



substrate analog for AMP-
DMAPP transferase



substrate analog for
protein prenyltransferase

P8.20: In a classic experiment in physical organic chemistry, (*R*)-2-iodooctane was allowed to react (non-enzymatically) with a radioactive isotope of iodide ion, and the researchers monitored how fast the radioactive iodide was incorporated into the alkane (the rate constant of incorporation, k_i) and how fast optical activity was lost (the rate constant of racemization, k_r). They found that the rate of racemization was, within experimental error, equal to twice the rate of incorporation. Discuss the significance of this result - what does it say about the actual mechanism of the reaction?